


NAME: _____

7s



BAZ

SCORE

BASELINE

CHECK 1

CHECK 2



BASELINE



Name: _____

Date: _____

- | | | | | | |
|-----|-----------------------|-----|-----------------------|-----|---------------------|
| 1. | $5 \times 7 =$ _____ | 21. | $8 \times 7 =$ _____ | 41. | $70 \div 7 =$ _____ |
| 2. | $7 \times 7 =$ _____ | 22. | $5 \times 7 =$ _____ | 42. | $77 \div 7 =$ _____ |
| 3. | $8 \times 7 =$ _____ | 23. | $3 \times 7 =$ _____ | 43. | $56 \div 7 =$ _____ |
| 4. | $4 \times 7 =$ _____ | 24. | $4 \times 7 =$ _____ | 44. | $35 \div 7 =$ _____ |
| 5. | $3 \times 7 =$ _____ | 25. | $6 \times 7 =$ _____ | 45. | $49 \div 7 =$ _____ |
| 6. | $9 \times 7 =$ _____ | 26. | $9 \times 7 =$ _____ | 46. | $42 \div 7 =$ _____ |
| 7. | $11 \times 7 =$ _____ | 27. | $10 \times 7 =$ _____ | 47. | $14 \div 7 =$ _____ |
| 8. | $12 \times 7 =$ _____ | 28. | $7 \times 7 =$ _____ | 48. | $7 \div 7 =$ _____ |
| 9. | $3 \times 7 =$ _____ | 29. | $2 \times 7 =$ _____ | 49. | $63 \div 7 =$ _____ |
| 10. | $1 \times 7 =$ _____ | 30. | $1 \times 7 =$ _____ | 50. | $77 \div 7 =$ _____ |
| 11. | $8 \times 7 =$ _____ | 31. | $14 \div 7 =$ _____ | 51. | $49 \div 7 =$ _____ |
| 12. | $6 \times 7 =$ _____ | 32. | $28 \div 7 =$ _____ | 52. | $28 \div 7 =$ _____ |
| 13. | $7 \times 7 =$ _____ | 33. | $35 \div 7 =$ _____ | 53. | $21 \div 7 =$ _____ |
| 14. | $9 \times 7 =$ _____ | 34. | $63 \div 7 =$ _____ | 54. | $56 \div 7 =$ _____ |
| 15. | $12 \times 7 =$ _____ | 35. | $70 \div 7 =$ _____ | 55. | $35 \div 7 =$ _____ |
| 16. | $11 \times 7 =$ _____ | 36. | $84 \div 7 =$ _____ | 56. | $84 \div 7 =$ _____ |
| 17. | $2 \times 7 =$ _____ | 37. | $49 \div 7 =$ _____ | 57. | $70 \div 7 =$ _____ |
| 18. | $1 \times 7 =$ _____ | 38. | $42 \div 7 =$ _____ | 58. | $42 \div 7 =$ _____ |
| 19. | $10 \times 7 =$ _____ | 39. | $21 \div 7 =$ _____ | 59. | $7 \div 7 =$ _____ |
| 20. | $9 \times 7 =$ _____ | 40. | $7 \div 7 =$ _____ | 60. | $14 \div 7 =$ _____ |

SCORE:
(5 minute limit)

/60

TIME TAKEN (optional)

<input type="text"/>	<input type="text"/>
MINUTES	SECONDS



Name: _____

Date: _____

MULTIPLICATION 1

Practise 7s

Complete first and then use it to help you if you get stuck.

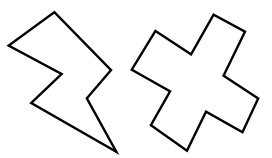
ROCK BOX

1.	$1 \times 7 =$	_____
2.	$2 \times 7 =$	_____
3.	$3 \times 7 =$	_____
4.	$4 \times 7 =$	_____
5.	$5 \times 7 =$	_____
6.	$6 \times 7 =$	_____
7.	$7 \times 7 =$	_____
8.	$8 \times 7 =$	_____
9.	$9 \times 7 =$	_____
10.	$10 \times 7 =$	_____
11.	$11 \times 7 =$	_____
12.	$12 \times 7 =$	_____

- | | | | | | |
|-----|-----------------|-------|-----|-----------------|-------|
| 21. | $11 \times 7 =$ | _____ | 41. | $9 \times 7 =$ | _____ |
| 22. | $4 \times 7 =$ | _____ | 42. | $5 \times 7 =$ | _____ |
| 23. | $10 \times 7 =$ | _____ | 43. | $3 \times 7 =$ | _____ |
| 24. | $8 \times 7 =$ | _____ | 44. | $2 \times 7 =$ | _____ |
| 25. | $9 \times 7 =$ | _____ | 45. | $12 \times 7 =$ | _____ |
| 26. | $1 \times 7 =$ | _____ | 46. | $10 \times 7 =$ | _____ |
| 27. | $3 \times 7 =$ | _____ | 47. | $11 \times 7 =$ | _____ |
| 28. | $12 \times 7 =$ | _____ | 48. | $1 \times 7 =$ | _____ |
| 29. | $4 \times 7 =$ | _____ | 49. | $5 \times 7 =$ | _____ |
| 30. | $9 \times 7 =$ | _____ | 50. | $7 \times 7 =$ | _____ |
| 31. | $8 \times 7 =$ | _____ | 51. | $8 \times 7 =$ | _____ |
| 32. | $7 \times 7 =$ | _____ | 52. | $11 \times 7 =$ | _____ |
| 33. | $11 \times 7 =$ | _____ | 53. | $10 \times 7 =$ | _____ |
| 34. | $7 \times 7 =$ | _____ | 54. | $6 \times 7 =$ | _____ |
| 35. | $1 \times 7 =$ | _____ | 55. | $9 \times 7 =$ | _____ |
| 36. | $12 \times 7 =$ | _____ | 56. | $4 \times 7 =$ | _____ |
| 37. | $2 \times 7 =$ | _____ | 57. | $3 \times 7 =$ | _____ |
| 38. | $5 \times 7 =$ | _____ | 58. | $6 \times 7 =$ | _____ |
| 39. | $4 \times 7 =$ | _____ | 59. | $9 \times 7 =$ | _____ |
| 40. | $6 \times 7 =$ | _____ | 60. | $11 \times 7 =$ | _____ |

Continue here...

- | | | |
|-----|-----------------|-------|
| 13. | $7 \times 7 =$ | _____ |
| 14. | $12 \times 7 =$ | _____ |
| 15. | $8 \times 7 =$ | _____ |
| 16. | $12 \times 7 =$ | _____ |
| 17. | $10 \times 7 =$ | _____ |
| 18. | $9 \times 7 =$ | _____ |
| 19. | $11 \times 7 =$ | _____ |
| 20. | $3 \times 7 =$ | _____ |



SCORE:

Grown-ups:
Can learners spot links between neighbouring questions?



Name: _____

Date: _____

MULTIPLICATION 2

Practise 7s

Complete first and then use it to help you if you get stuck.

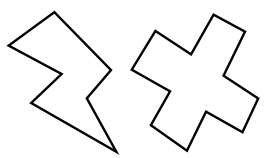
ROCK BOX

1.	$1 \times 7 =$ _____	13.	$7 \times 1 =$ _____
2.	$2 \times 7 =$ _____	14.	$7 \times 2 =$ _____
3.	$3 \times 7 =$ _____	15.	$7 \times 3 =$ _____
4.	$4 \times 7 =$ _____	16.	$7 \times 4 =$ _____
5.	$5 \times 7 =$ _____	17.	$7 \times 5 =$ _____
6.	$6 \times 7 =$ _____	18.	$7 \times 6 =$ _____
7.	$7 \times 7 =$ _____	19.	$7 \times 7 =$ _____
8.	$8 \times 7 =$ _____	20.	$7 \times 8 =$ _____
9.	$9 \times 7 =$ _____	21.	$7 \times 9 =$ _____
10.	$10 \times 7 =$ _____	22.	$7 \times 10 =$ _____
11.	$11 \times 7 =$ _____	23.	$7 \times 11 =$ _____
12.	$12 \times 7 =$ _____	24.	$7 \times 12 =$ _____

- 41. $7 \times 3 =$ _____
- 42. $5 \times 7 =$ _____
- 43. $7 \times 8 =$ _____
- 44. $7 \times 7 =$ _____
- 45. $8 \times 7 =$ _____
- 46. $7 \times 12 =$ _____
- 47. $4 \times 7 =$ _____
- 48. $7 \times 2 =$ _____
- 49. $1 \times 7 =$ _____
- 50. $7 \times 7 =$ _____
- 51. $7 \times 11 =$ _____
- 52. $7 \times 1 =$ _____

- Continue here...
- 25. $7 \times 4 =$ _____
 - 26. $1 \times 7 =$ _____
 - 27. $7 \times 5 =$ _____
 - 28. $6 \times 7 =$ _____
 - 29. $7 \times 6 =$ _____
 - 30. $5 \times 7 =$ _____
 - 31. $7 \times 2 =$ _____
 - 32. $4 \times 7 =$ _____
 - 33. $7 \times 7 =$ _____
 - 34. $7 \times 8 =$ _____
 - 35. $9 \times 7 =$ _____
 - 36. $7 \times 11 =$ _____
 - 37. $12 \times 7 =$ _____
 - 38. $11 \times 7 =$ _____
 - 39. $2 \times 7 =$ _____
 - 40. $7 \times 8 =$ _____

- 53. $7 \times 12 =$ _____
- 54. $7 \times 7 =$ _____
- 55. $7 \times 9 =$ _____
- 56. $7 \times 6 =$ _____
- 57. $7 \times 5 =$ _____
- 58. $7 \times 10 =$ _____
- 59. $7 \times 3 =$ _____
- 60. $3 \times 7 =$ _____



SCORE:

Grown-ups:
Can learners spot links between neighbouring questions?



Name: _____

Date: _____

MISSING NUMBER 1

Practise 7s

Complete first and then use it to help you if you get stuck.

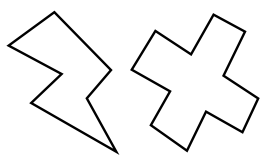
ROCK BOX

1.	_____	$\times 7 = 7$
2.	_____	$\times 7 = 14$
3.	_____	$\times 7 = 21$
4.	_____	$\times 7 = 28$
5.	_____	$\times 7 = 35$
6.	_____	$\times 7 = 42$
7.	_____	$\times 7 = 49$
8.	_____	$\times 7 = 56$
9.	_____	$\times 7 = 63$
10.	_____	$\times 7 = 70$
11.	_____	$\times 7 = 77$
12.	_____	$\times 7 = 84$

- | | | | | | |
|-----|-------|-----------------|-----|-------|-----------------|
| 21. | _____ | $\times 7 = 35$ | 41. | _____ | $\times 7 = 14$ |
| 22. | _____ | $\times 7 = 14$ | 42. | _____ | $\times 7 = 21$ |
| 23. | _____ | $\times 7 = 42$ | 42. | _____ | $\times 7 = 7$ |
| 24. | _____ | $\times 7 = 84$ | 44. | _____ | $\times 7 = 35$ |
| 25. | _____ | $\times 7 = 70$ | 45. | _____ | $\times 7 = 49$ |
| 26. | _____ | $\times 7 = 63$ | 46. | _____ | $\times 7 = 28$ |
| 27. | _____ | $\times 7 = 77$ | 47. | _____ | $\times 7 = 56$ |
| 28. | _____ | $\times 7 = 49$ | 48. | _____ | $\times 7 = 84$ |
| 29. | _____ | $\times 7 = 28$ | 49. | _____ | $\times 7 = 70$ |
| 30. | _____ | $\times 7 = 21$ | 50. | _____ | $\times 7 = 63$ |
| 31. | _____ | $\times 7 = 7$ | 51. | _____ | $\times 7 = 42$ |
| 32. | _____ | $\times 7 = 77$ | 52. | _____ | $\times 7 = 21$ |
| 33. | _____ | $\times 7 = 56$ | 53. | _____ | $\times 7 = 77$ |
| 34. | _____ | $\times 7 = 35$ | 54. | _____ | $\times 7 = 7$ |
| 35. | _____ | $\times 7 = 7$ | 55. | _____ | $\times 7 = 14$ |
| 36. | _____ | $\times 7 = 28$ | 56. | _____ | $\times 7 = 49$ |
| 37. | _____ | $\times 7 = 42$ | 57. | _____ | $\times 7 = 35$ |
| 38. | _____ | $\times 7 = 49$ | 58. | _____ | $\times 7 = 56$ |
| 39. | _____ | $\times 7 = 63$ | 59. | _____ | $\times 7 = 63$ |
| 40. | _____ | $\times 7 = 84$ | 60. | _____ | $\times 7 = 70$ |

Continue here...

- | | | |
|-----|-------|-----------------|
| 13. | _____ | $\times 7 = 28$ |
| 14. | _____ | $\times 7 = 7$ |
| 15. | _____ | $\times 7 = 70$ |
| 16. | _____ | $\times 7 = 63$ |
| 17. | _____ | $\times 7 = 84$ |
| 18. | _____ | $\times 7 = 77$ |
| 19. | _____ | $\times 7 = 56$ |
| 20. | _____ | $\times 7 = 49$ |



SCORE:

Grown-ups:
Can learners spot links between neighbouring questions?



Name: _____

Date: _____

MISSING NUMBER 2

Practise 7s

Complete first and then use it to help you if you get stuck.

ROCK BOX			
1.	$\times 7 = 7$	2.	$\times 1 = 7$
3.	$\times 7 = 14$	4.	$\times 2 = 14$
5.	$\times 7 = 21$	6.	$\times 3 = 21$
7.	$\times 7 = 28$	8.	$\times 4 = 28$
9.	$\times 7 = 35$	10.	$\times 5 = 35$
11.	$\times 7 = 42$	12.	$\times 6 = 42$
13.	$\times 7 = 49$	14.	$\times 7 = 49$
15.	$\times 7 = 56$	16.	$\times 8 = 56$
17.	$\times 7 = 63$	18.	$\times 9 = 63$
19.	$\times 7 = 70$	20.	$\times 10 = 70$
21.	$\times 7 = 77$	22.	$\times 11 = 77$
23.	$\times 7 = 84$	24.	$\times 12 = 84$

Continue here...

25. _____ $\times 7 = 63$

33. _____ $\times 1 = 7$

26. _____ $\times 9 = 63$

34. _____ $\times 11 = 77$

27. _____ $\times 7 = 42$

35. _____ $\times 9 = 63$

28. _____ $\times 7 = 49$

36. _____ $\times 7 = 84$

29. _____ $\times 8 = 56$

37. _____ $\times 7 = 49$

30. _____ $\times 7 = 77$

38. _____ $\times 5 = 35$

31. _____ $\times 12 = 84$

39. _____ $\times 7 = 42$

32. _____ $\times 7 = 7$

40. _____ $\times 3 = 21$

41. _____ $\times 4 = 28$

42. _____ $\times 7 = 14$

43. _____ $\times 7 = 56$

44. _____ $\times 12 = 84$

45. _____ $\times 6 = 42$

46. _____ $\times 7 = 49$

47. _____ $\times 7 = 63$

48. _____ $\times 11 = 77$

49. _____ $\times 7 = 70$

50. _____ $\times 7 = 7$

51. _____ $\times 7 = 84$

52. _____ $\times 7 = 21$

53. _____ $\times 7 = 28$

54. _____ $\times 7 = 35$

55. _____ $\times 7 = 70$

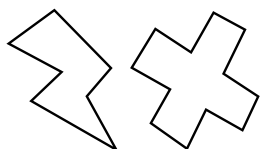
56. _____ $\times 2 = 14$

57. _____ $\times 8 = 56$

58. _____ $\times 1 = 7$

59. _____ $\times 9 = 63$

60. _____ $\times 12 = 84$



SCORE:

Grown-ups:
Can learners spot links between neighbouring questions?



Name: _____

Date: _____

DIVISION 1

Practise 7s

Complete first and then use it to help you if you get stuck.

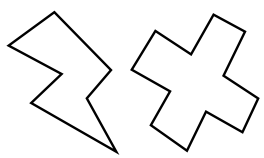
ROCK BOX

1.	$7 \div 7 =$	_____
2.	$14 \div 7 =$	_____
3.	$21 \div 7 =$	_____
4.	$28 \div 7 =$	_____
5.	$35 \div 7 =$	_____
6.	$42 \div 7 =$	_____
7.	$49 \div 7 =$	_____
8.	$56 \div 7 =$	_____
9.	$63 \div 7 =$	_____
10.	$70 \div 7 =$	_____
11.	$77 \div 7 =$	_____
12.	$84 \div 7 =$	_____

- | | | | | | |
|-----|---------------|-------|-----|---------------|-------|
| 21. | $77 \div 7 =$ | _____ | 41. | $63 \div 7 =$ | _____ |
| 22. | $63 \div 7 =$ | _____ | 42. | $56 \div 7 =$ | _____ |
| 23. | $35 \div 7 =$ | _____ | 43. | $14 \div 7 =$ | _____ |
| 24. | $28 \div 7 =$ | _____ | 44. | $42 \div 7 =$ | _____ |
| 25. | $21 \div 7 =$ | _____ | 45. | $49 \div 7 =$ | _____ |
| 26. | $42 \div 7 =$ | _____ | 46. | $42 \div 7 =$ | _____ |
| 27. | $84 \div 7 =$ | _____ | 47. | $35 \div 7 =$ | _____ |
| 28. | $56 \div 7 =$ | _____ | 48. | $56 \div 7 =$ | _____ |
| 29. | $28 \div 7 =$ | _____ | 49. | $14 \div 7 =$ | _____ |
| 30. | $70 \div 7 =$ | _____ | 50. | $7 \div 7 =$ | _____ |
| 31. | $77 \div 7 =$ | _____ | 51. | $28 \div 7 =$ | _____ |
| 32. | $63 \div 7 =$ | _____ | 52. | $63 \div 7 =$ | _____ |
| 33. | $49 \div 7 =$ | _____ | 53. | $21 \div 7 =$ | _____ |
| 34. | $7 \div 7 =$ | _____ | 54. | $56 \div 7 =$ | _____ |
| 35. | $35 \div 7 =$ | _____ | 55. | $77 \div 7 =$ | _____ |
| 36. | $56 \div 7 =$ | _____ | 56. | $70 \div 7 =$ | _____ |
| 37. | $84 \div 7 =$ | _____ | 57. | $84 \div 7 =$ | _____ |
| 38. | $21 \div 7 =$ | _____ | 58. | $49 \div 7 =$ | _____ |
| 39. | $7 \div 7 =$ | _____ | 59. | $35 \div 7 =$ | _____ |
| 40. | $42 \div 7 =$ | _____ | 60. | $42 \div 7 =$ | _____ |

Continue here...

- | | | |
|-----|---------------|-------|
| 13. | $84 \div 7 =$ | _____ |
| 14. | $56 \div 7 =$ | _____ |
| 15. | $70 \div 7 =$ | _____ |
| 16. | $42 \div 7 =$ | _____ |
| 17. | $77 \div 7 =$ | _____ |
| 18. | $7 \div 7 =$ | _____ |
| 19. | $21 \div 7 =$ | _____ |
| 20. | $49 \div 7 =$ | _____ |



SCORE:

Grown-ups:
Can learners spot links between neighbouring questions?



Name: _____

Date: _____

DIVISION 2

Practise 7s

Complete first and then use it to help you if you get stuck

ROCK BOX

1. $7 \div 7 =$

2. $7 \div 1 =$

3. $14 \div 7 =$

4. $14 \div 2 =$

5. $21 \div 7 =$

6. $21 \div 3 =$

7. $28 \div 7 =$

8. $28 \div 4 =$

9. $35 \div 7 =$

10. $35 \div 5 =$

11. $42 \div 7 =$

12. $42 \div 6 =$

13. $49 \div 7 =$

14. $49 \div 7 =$

15. $56 \div 7 =$

16. $56 \div 8 =$

17. $63 \div 7 =$

18. $63 \div 9 =$

19. $70 \div 7 =$

20. $70 \div 10 =$

21. $77 \div 7 =$

22. $77 \div 11 =$

23. $84 \div 7 =$

24. $84 \div 12 =$

41. $56 \div 8 =$

42. $42 \div 6 =$

43. $35 \div 7 =$

44. $84 \div 12 =$

45. $70 \div 7 =$

46. $21 \div 7 =$

47. $49 \div 7 =$

48. $7 \div 1 =$

49. $77 \div 7 =$

50. $28 \div 4 =$

51. $28 \div 7 =$

52. $56 \div 7 =$

53. $63 \div 9 =$

54. $56 \div 8 =$

55. $70 \div 7 =$

56. $42 \div 7 =$

57. $14 \div 2 =$

58. $21 \div 3 =$

59. $49 \div 7 =$

60. $35 \div 5 =$

Continue here...

25. $35 \div 5 =$

33. $42 \div 6 =$

26. $21 \div 7 =$

34. $35 \div 7 =$

27. $35 \div 7 =$

35. $42 \div 7 =$

28. $63 \div 7 =$

36. $63 \div 9 =$

29. $21 \div 3 =$

37. $77 \div 11 =$

30. $7 \div 7 =$

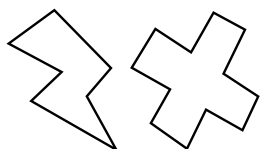
38. $63 \div 7 =$

31. $7 \div 1 =$

39. $28 \div 7 =$

32. $14 \div 7 =$

40. $49 \div 7 =$



SCORE:

Grown-ups:
Can learners spot links between neighbouring questions?





CHECK 1



Name: _____

Date: _____

- | | | | | | |
|-----|-----------------------|-----|-----------------------|-----|---------------------|
| 1. | $8 \times 7 =$ _____ | 21. | $8 \times 7 =$ _____ | 41. | $14 \div 7 =$ _____ |
| 2. | $2 \times 7 =$ _____ | 22. | $10 \times 7 =$ _____ | 42. | $70 \div 7 =$ _____ |
| 3. | $7 \times 7 =$ _____ | 23. | $12 \times 7 =$ _____ | 43. | $56 \div 7 =$ _____ |
| 4. | $4 \times 7 =$ _____ | 24. | $9 \times 7 =$ _____ | 44. | $7 \div 7 =$ _____ |
| 5. | $3 \times 7 =$ _____ | 25. | $2 \times 7 =$ _____ | 45. | $35 \div 7 =$ _____ |
| 6. | $6 \times 7 =$ _____ | 26. | $8 \times 7 =$ _____ | 46. | $63 \div 7 =$ _____ |
| 7. | $7 \times 7 =$ _____ | 27. | $5 \times 7 =$ _____ | 47. | $49 \div 7 =$ _____ |
| 8. | $10 \times 7 =$ _____ | 28. | $4 \times 7 =$ _____ | 48. | $7 \div 7 =$ _____ |
| 9. | $12 \times 7 =$ _____ | 29. | $3 \times 7 =$ _____ | 49. | $49 \div 7 =$ _____ |
| 10. | $1 \times 7 =$ _____ | 30. | $6 \times 7 =$ _____ | 50. | $84 \div 7 =$ _____ |
| 11. | $9 \times 7 =$ _____ | 31. | $21 \div 7 =$ _____ | 51. | $28 \div 7 =$ _____ |
| 12. | $2 \times 7 =$ _____ | 32. | $42 \div 7 =$ _____ | 52. | $42 \div 7 =$ _____ |
| 13. | $11 \times 7 =$ _____ | 33. | $63 \div 7 =$ _____ | 53. | $35 \div 7 =$ _____ |
| 14. | $7 \times 7 =$ _____ | 34. | $35 \div 7 =$ _____ | 54. | $21 \div 7 =$ _____ |
| 15. | $9 \times 7 =$ _____ | 35. | $42 \div 7 =$ _____ | 55. | $70 \div 7 =$ _____ |
| 16. | $4 \times 7 =$ _____ | 36. | $7 \div 7 =$ _____ | 56. | $77 \div 7 =$ _____ |
| 17. | $3 \times 7 =$ _____ | 37. | $63 \div 7 =$ _____ | 57. | $63 \div 7 =$ _____ |
| 18. | $6 \times 7 =$ _____ | 38. | $84 \div 7 =$ _____ | 58. | $7 \div 7 =$ _____ |
| 19. | $1 \times 7 =$ _____ | 39. | $56 \div 7 =$ _____ | 59. | $42 \div 7 =$ _____ |
| 20. | $5 \times 7 =$ _____ | 40. | $28 \div 7 =$ _____ | 60. | $28 \div 7 =$ _____ |

SCORE:
(5 minute limit)

/60

TIME TAKEN (optional)

<input type="text"/>	<input type="text"/>
MINUTES	SECONDS



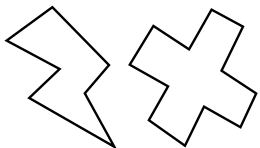
Name: _____

Date: _____

MULTIPLICATION 3

Practise 7s

- | | | | | | |
|-----|-----------------------|-----|-----------------------|-----|-----------------------|
| 1. | $7 \times 5 =$ _____ | 21. | $7 \times 8 =$ _____ | 41. | $1 \times 7 =$ _____ |
| 2. | $7 \times 3 =$ _____ | 22. | $7 \times 1 =$ _____ | 42. | $7 \times 12 =$ _____ |
| 3. | $3 \times 7 =$ _____ | 23. | $7 \times 2 =$ _____ | 43. | $11 \times 7 =$ _____ |
| 4. | $7 \times 7 =$ _____ | 24. | $4 \times 7 =$ _____ | 44. | $7 \times 7 =$ _____ |
| 5. | $7 \times 4 =$ _____ | 25. | $7 \times 6 =$ _____ | 45. | $7 \times 1 =$ _____ |
| 6. | $7 \times 7 =$ _____ | 26. | $9 \times 7 =$ _____ | 46. | $7 \times 3 =$ _____ |
| 7. | $5 \times 7 =$ _____ | 27. | $7 \times 12 =$ _____ | 47. | $12 \times 7 =$ _____ |
| 8. | $7 \times 8 =$ _____ | 28. | $11 \times 7 =$ _____ | 48. | $9 \times 7 =$ _____ |
| 9. | $9 \times 7 =$ _____ | 29. | $7 \times 1 =$ _____ | 49. | $7 \times 6 =$ _____ |
| 10. | $7 \times 11 =$ _____ | 30. | $7 \times 7 =$ _____ | 50. | $3 \times 7 =$ _____ |
| 11. | $12 \times 7 =$ _____ | 31. | $7 \times 11 =$ _____ | 51. | $5 \times 7 =$ _____ |
| 12. | $7 \times 12 =$ _____ | 32. | $7 \times 5 =$ _____ | 52. | $10 \times 7 =$ _____ |
| 13. | $1 \times 7 =$ _____ | 33. | $7 \times 3 =$ _____ | 53. | $7 \times 5 =$ _____ |
| 14. | $7 \times 10 =$ _____ | 34. | $7 \times 9 =$ _____ | 54. | $8 \times 7 =$ _____ |
| 15. | $7 \times 7 =$ _____ | 35. | $7 \times 7 =$ _____ | 55. | $7 \times 2 =$ _____ |
| 16. | $6 \times 7 =$ _____ | 36. | $7 \times 4 =$ _____ | 56. | $7 \times 4 =$ _____ |
| 17. | $3 \times 7 =$ _____ | 37. | $7 \times 3 =$ _____ | 57. | $7 \times 7 =$ _____ |
| 18. | $1 \times 7 =$ _____ | 38. | $2 \times 7 =$ _____ | 58. | $9 \times 7 =$ _____ |
| 19. | $4 \times 7 =$ _____ | 39. | $9 \times 7 =$ _____ | 59. | $7 \times 8 =$ _____ |
| 20. | $8 \times 7 =$ _____ | 40. | $7 \times 8 =$ _____ | 60. | $6 \times 7 =$ _____ |



SCORE:

Grown-ups:
Can learners spot links between neighbouring questions?



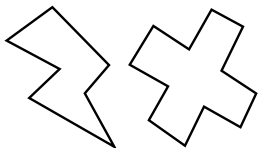
Name: _____

Date: _____

MISSING NUMBERS 3

Practise 7s

- | | | |
|--------------------|---------------------|---------------------|
| 1. _____ × 7 = 77 | 21. _____ × 7 = 28 | 41. _____ × 7 = 7 |
| 2. _____ × 7 = 84 | 22. _____ × 12 = 84 | 42. _____ × 11 = 77 |
| 3. _____ × 7 = 49 | 23. _____ × 7 = 56 | 43. _____ × 7 = 56 |
| 4. _____ × 7 = 35 | 24. _____ × 7 = 49 | 44. _____ × 9 = 63 |
| 5. _____ × 9 = 63 | 25. _____ × 5 = 35 | 45. _____ × 7 = 63 |
| 6. _____ × 6 = 42 | 26. _____ × 6 = 42 | 46. _____ × 7 = 70 |
| 7. _____ × 7 = 42 | 27. _____ × 7 = 14 | 47. _____ × 7 = 28 |
| 8. _____ × 4 = 28 | 28. _____ × 1 = 7 | 48. _____ × 2 = 14 |
| 9. _____ × 9 = 63 | 29. _____ × 7 = 70 | 49. _____ × 1 = 7 |
| 10. _____ × 3 = 21 | 30. _____ × 7 = 77 | 50. _____ × 7 = 56 |
| 11. _____ × 7 = 14 | 31. _____ × 9 = 63 | 51. _____ × 6 = 42 |
| 12. _____ × 1 = 7 | 32. _____ × 4 = 28 | 52. _____ × 4 = 28 |
| 13. _____ × 7 = 7 | 33. _____ × 7 = 21 | 53. _____ × 7 = 35 |
| 14. _____ × 7 = 70 | 34. _____ × 7 = 70 | 54. _____ × 7 = 49 |
| 15. _____ × 7 = 77 | 35. _____ × 7 = 21 | 55. _____ × 9 = 63 |
| 16. _____ × 7 = 49 | 36. _____ × 5 = 35 | 56. _____ × 7 = 77 |
| 17. _____ × 5 = 35 | 37. _____ × 7 = 63 | 57. _____ × 12 = 84 |
| 18. _____ × 8 = 56 | 38. _____ × 4 = 28 | 58. _____ × 7 = 84 |
| 19. _____ × 7 = 28 | 39. _____ × 7 = 7 | 59. _____ × 7 = 21 |
| 20. _____ × 7 = 49 | 40. _____ × 6 = 42 | 60. _____ × 9 = 63 |



SCORE:

Grown-ups:
Can learners spot links between neighbouring questions?



Name: _____

Date: _____

DIVISION 3

Practise 7s

1. $49 \div 7 =$ _____ 21. $84 \div 7 =$ _____ 41. $56 \div 7 =$ _____

2. $56 \div 7 =$ _____ 22. $42 \div 7 =$ _____ 42. $63 \div 7 =$ _____

3. $21 \div 3 =$ _____ 23. $63 \div 7 =$ _____ 43. $49 \div 7 =$ _____

4. $49 \div 7 =$ _____ 24. $49 \div 7 =$ _____ 44. $77 \div 11 =$ _____

5. $14 \div 7 =$ _____ 25. $21 \div 7 =$ _____ 45. $77 \div 7 =$ _____

6. $28 \div 4 =$ _____ 26. $70 \div 7 =$ _____ 46. $7 \div 1 =$ _____

7. $70 \div 7 =$ _____ 27. $35 \div 5 =$ _____ 47. $70 \div 7 =$ _____

8. $77 \div 11 =$ _____ 28. $49 \div 7 =$ _____ 48. $63 \div 9 =$ _____

9. $77 \div 7 =$ _____ 29. $28 \div 4 =$ _____ 49. $56 \div 8 =$ _____

10. $49 \div 7 =$ _____ 30. $42 \div 7 =$ _____ 50. $28 \div 7 =$ _____

11. $35 \div 5 =$ _____ 31. $28 \div 7 =$ _____ 51. $28 \div 4 =$ _____

12. $84 \div 12 =$ _____ 32. $21 \div 3 =$ _____ 52. $42 \div 7 =$ _____

13. $84 \div 7 =$ _____ 33. $63 \div 9 =$ _____ 53. $21 \div 7 =$ _____

14. $56 \div 7 =$ _____ 34. $70 \div 7 =$ _____ 54. $49 \div 7 =$ _____

15. $77 \div 7 =$ _____ 35. $77 \div 7 =$ _____ 55. $21 \div 3 =$ _____

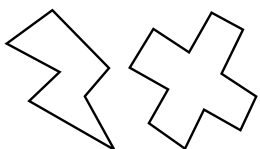
16. $35 \div 7 =$ _____ 36. $70 \div 7 =$ _____ 56. $84 \div 7 =$ _____

17. $42 \div 6 =$ _____ 37. $84 \div 12 =$ _____ 57. $42 \div 7 =$ _____

18. $21 \div 7 =$ _____ 38. $7 \div 1 =$ _____ 58. $35 \div 7 =$ _____

19. $21 \div 3 =$ _____ 39. $7 \div 7 =$ _____ 59. $14 \div 2 =$ _____

20. $63 \div 9 =$ _____ 40. $56 \div 8 =$ _____ 60. $14 \div 7 =$ _____



SCORE:

Grown-ups:
Can learners spot links between neighbouring questions?



Name: _____

Date: _____

MULTIPLICATION 4

Practise 7s

1. $12 \times 7 =$ _____ 21. $1 \times 7 =$ _____ 41. $7 \times 3 =$ _____

2. $11 \times 7 =$ _____ 22. $7 \times 4 =$ _____ 42. $7 \times 2 =$ _____

3. $7 \times 8 =$ _____ 23. $4 \times 7 =$ _____ 43. $8 \times 7 =$ _____

4. $9 \times 7 =$ _____ 24. $7 \times 3 =$ _____ 44. $7 \times 4 =$ _____

5. $7 \times 7 =$ _____ 25. $7 \times 6 =$ _____ 45. $7 \times 2 =$ _____

6. $7 \times 5 =$ _____ 26. $9 \times 7 =$ _____ 46. $1 \times 7 =$ _____

7. $6 \times 7 =$ _____ 27. $7 \times 8 =$ _____ 47. $11 \times 7 =$ _____

8. $7 \times 4 =$ _____ 28. $7 \times 10 =$ _____ 48. $12 \times 7 =$ _____

9. $3 \times 7 =$ _____ 29. $11 \times 7 =$ _____ 49. $7 \times 7 =$ _____

10. $7 \times 3 =$ _____ 30. $7 \times 6 =$ _____ 50. $10 \times 7 =$ _____

11. $6 \times 7 =$ _____ 31. $6 \times 7 =$ _____ 51. $4 \times 7 =$ _____

12. $7 \times 7 =$ _____ 32. $9 \times 7 =$ _____ 52. $7 \times 9 =$ _____

13. $10 \times 7 =$ _____ 33. $3 \times 7 =$ _____ 53. $6 \times 7 =$ _____

14. $7 \times 12 =$ _____ 34. $5 \times 7 =$ _____ 54. $7 \times 8 =$ _____

15. $11 \times 7 =$ _____ 35. $7 \times 8 =$ _____ 55. $4 \times 7 =$ _____

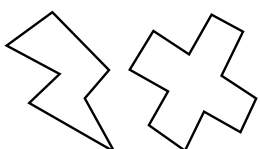
16. $6 \times 7 =$ _____ 36. $7 \times 11 =$ _____ 56. $11 \times 7 =$ _____

17. $7 \times 8 =$ _____ 37. $7 \times 10 =$ _____ 57. $7 \times 3 =$ _____

18. $7 \times 3 =$ _____ 38. $1 \times 7 =$ _____ 58. $7 \times 10 =$ _____

19. $2 \times 7 =$ _____ 39. $2 \times 7 =$ _____ 59. $7 \times 6 =$ _____

20. $7 \times 1 =$ _____ 40. $7 \times 5 =$ _____ 60. $9 \times 7 =$ _____



SCORE:

Grown-ups:
Can learners spot links between neighbouring questions?



Name: _____

MISSING NUMBERS 4

Practise 7s

Date: _____

1. _____ \times 7 = 42

21. _____ \times 7 = 35

41. _____ \times 7 = 42

2. _____ \times 9 = 63

22. _____ \times 7 = 28

42. _____ \times 5 = 35

3. _____ \times 8 = 56

23. _____ \times 3 = 21

43. _____ \times 7 = 70

4. _____ \times 4 = 28

24. _____ \times 6 = 42

44. _____ \times 7 = 7

5. _____ \times 7 = 21

25. _____ \times 7 = 49

45. _____ \times 9 = 63

6. _____ \times 7 = 35

26. _____ \times 7 = 35

46. _____ \times 7 = 77

7. _____ \times 6 = 42

27. _____ \times 7 = 63

47. _____ \times 7 = 49

8. _____ \times 7 = 7

28. _____ \times 8 = 56

48. _____ \times 3 = 21

9. _____ \times 7 = 14

29. _____ \times 7 = 7

49. _____ \times 2 = 14

10. _____ \times 7 = 70

30. _____ \times 12 = 84

50. _____ \times 7 = 28

11. _____ \times 12 = 84

31. _____ \times 7 = 21

51. _____ \times 5 = 35

12. _____ \times 7 = 42

32. _____ \times 2 = 14

52. _____ \times 7 = 42

13. _____ \times 7 = 49

33. _____ \times 6 = 42

53. _____ \times 7 = 70

14. _____ \times 1 = 7

34. _____ \times 7 = 14

54. _____ \times 12 = 84

15. _____ \times 7 = 14

35. _____ \times 7 = 7

55. _____ \times 1 = 7

16. _____ \times 7 = 77

36. _____ \times 12 = 84

56. _____ \times 7 = 70

17. _____ \times 9 = 63

37. _____ \times 9 = 63

57. _____ \times 9 = 63

18. _____ \times 7 = 70

38. _____ \times 7 = 28

58. _____ \times 7 = 28

19. _____ \times 6 = 42

39. _____ \times 7 = 21

59. _____ \times 7 = 49

20. _____ \times 7 = 49

40. _____ \times 8 = 56

60. _____ \times 7 = 49



SCORE:

Grown-ups:
Can learners spot links between neighbouring questions?



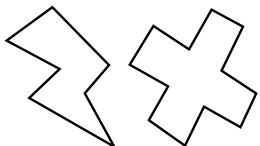
Name: _____

Date: _____

DIVISION 4

Practise 7s

- | | | | | | |
|-----|----------------------|-----|----------------------|-----|----------------------|
| 1. | $84 \div 7 =$ _____ | 21. | $70 \div 7 =$ _____ | 41. | $84 \div 7 =$ _____ |
| 2. | $77 \div 7 =$ _____ | 22. | $84 \div 7 =$ _____ | 42. | $7 \div 1 =$ _____ |
| 3. | $56 \div 7 =$ _____ | 23. | $77 \div 11 =$ _____ | 43. | $7 \div 7 =$ _____ |
| 4. | $7 \div 7 =$ _____ | 24. | $49 \div 7 =$ _____ | 44. | $28 \div 7 =$ _____ |
| 5. | $63 \div 9 =$ _____ | 25. | $56 \div 7 =$ _____ | 45. | $49 \div 7 =$ _____ |
| 6. | $56 \div 7 =$ _____ | 26. | $28 \div 7 =$ _____ | 46. | $21 \div 7 =$ _____ |
| 7. | $35 \div 7 =$ _____ | 27. | $35 \div 7 =$ _____ | 47. | $63 \div 9 =$ _____ |
| 8. | $42 \div 6 =$ _____ | 28. | $63 \div 7 =$ _____ | 48. | $70 \div 7 =$ _____ |
| 9. | $49 \div 7 =$ _____ | 29. | $63 \div 9 =$ _____ | 49. | $77 \div 7 =$ _____ |
| 10. | $70 \div 7 =$ _____ | 30. | $56 \div 7 =$ _____ | 50. | $14 \div 7 =$ _____ |
| 11. | $21 \div 3 =$ _____ | 31. | $42 \div 7 =$ _____ | 51. | $49 \div 7 =$ _____ |
| 12. | $14 \div 2 =$ _____ | 32. | $28 \div 4 =$ _____ | 52. | $21 \div 7 =$ _____ |
| 13. | $35 \div 7 =$ _____ | 33. | $7 \div 7 =$ _____ | 53. | $84 \div 12 =$ _____ |
| 14. | $42 \div 7 =$ _____ | 34. | $35 \div 5 =$ _____ | 54. | $28 \div 7 =$ _____ |
| 15. | $63 \div 7 =$ _____ | 35. | $49 \div 7 =$ _____ | 55. | $49 \div 7 =$ _____ |
| 16. | $28 \div 7 =$ _____ | 36. | $14 \div 7 =$ _____ | 56. | $42 \div 6 =$ _____ |
| 17. | $28 \div 4 =$ _____ | 37. | $63 \div 9 =$ _____ | 57. | $7 \div 7 =$ _____ |
| 18. | $56 \div 8 =$ _____ | 38. | $21 \div 7 =$ _____ | 58. | $14 \div 2 =$ _____ |
| 19. | $7 \div 7 =$ _____ | 39. | $77 \div 11 =$ _____ | 59. | $70 \div 7 =$ _____ |
| 20. | $84 \div 12 =$ _____ | 40. | $42 \div 6 =$ _____ | 60. | $7 \div 1 =$ _____ |



SCORE:

Grown-ups:
Can learners spot links between neighbouring questions?





CHECK 2



Name: _____

Date: _____

- | | | | | | |
|-----|-----------------------|-----|-----------------------|-----|---------------------|
| 1. | $9 \times 7 =$ _____ | 21. | $3 \times 7 =$ _____ | 41. | $7 \div 7 =$ _____ |
| 2. | $4 \times 7 =$ _____ | 22. | $10 \times 7 =$ _____ | 42. | $63 \div 7 =$ _____ |
| 3. | $12 \times 7 =$ _____ | 23. | $9 \times 7 =$ _____ | 43. | $49 \div 7 =$ _____ |
| 4. | $3 \times 7 =$ _____ | 24. | $4 \times 7 =$ _____ | 44. | $77 \div 7 =$ _____ |
| 5. | $6 \times 7 =$ _____ | 25. | $8 \times 7 =$ _____ | 45. | $56 \div 7 =$ _____ |
| 6. | $10 \times 7 =$ _____ | 26. | $6 \times 7 =$ _____ | 46. | $70 \div 7 =$ _____ |
| 7. | $12 \times 7 =$ _____ | 27. | $12 \times 7 =$ _____ | 47. | $84 \div 7 =$ _____ |
| 8. | $2 \times 7 =$ _____ | 28. | $5 \times 7 =$ _____ | 48. | $7 \div 7 =$ _____ |
| 9. | $6 \times 7 =$ _____ | 29. | $1 \times 7 =$ _____ | 49. | $21 \div 7 =$ _____ |
| 10. | $8 \times 7 =$ _____ | 30. | $7 \times 7 =$ _____ | 50. | $56 \div 7 =$ _____ |
| 11. | $4 \times 7 =$ _____ | 31. | $63 \div 7 =$ _____ | 51. | $28 \div 7 =$ _____ |
| 12. | $5 \times 7 =$ _____ | 32. | $35 \div 7 =$ _____ | 52. | $49 \div 7 =$ _____ |
| 13. | $7 \times 7 =$ _____ | 33. | $28 \div 7 =$ _____ | 53. | $21 \div 7 =$ _____ |
| 14. | $6 \times 7 =$ _____ | 34. | $70 \div 7 =$ _____ | 54. | $77 \div 7 =$ _____ |
| 15. | $10 \times 7 =$ _____ | 35. | $77 \div 7 =$ _____ | 55. | $49 \div 7 =$ _____ |
| 16. | $12 \times 7 =$ _____ | 36. | $21 \div 7 =$ _____ | 56. | $35 \div 7 =$ _____ |
| 17. | $1 \times 7 =$ _____ | 37. | $42 \div 7 =$ _____ | 57. | $14 \div 7 =$ _____ |
| 18. | $11 \times 7 =$ _____ | 38. | $49 \div 7 =$ _____ | 58. | $49 \div 7 =$ _____ |
| 19. | $9 \times 7 =$ _____ | 39. | $35 \div 7 =$ _____ | 59. | $42 \div 7 =$ _____ |
| 20. | $7 \times 7 =$ _____ | 40. | $56 \div 7 =$ _____ | 60. | $7 \div 7 =$ _____ |

SCORE:
(5 minute limit)

/60

TIME TAKEN (optional)

<input type="text"/>	<input type="text"/>
MINUTES	SECONDS

