

NAME: _____

55



STAR

SCORE

BASELINE

CHECK 1

CHECK 2



BASELINE



Name: _____

Date: _____

- | | | | | | |
|-----|-----------------------|-----|-----------------------|-----|---------------------|
| 1. | $5 \times 5 =$ _____ | 21. | $8 \times 5 =$ _____ | 41. | $50 \div 5 =$ _____ |
| 2. | $7 \times 5 =$ _____ | 22. | $5 \times 5 =$ _____ | 42. | $55 \div 5 =$ _____ |
| 3. | $8 \times 5 =$ _____ | 23. | $3 \times 5 =$ _____ | 43. | $40 \div 5 =$ _____ |
| 4. | $4 \times 5 =$ _____ | 24. | $4 \times 5 =$ _____ | 44. | $25 \div 5 =$ _____ |
| 5. | $3 \times 5 =$ _____ | 25. | $6 \times 5 =$ _____ | 45. | $35 \div 5 =$ _____ |
| 6. | $9 \times 5 =$ _____ | 26. | $9 \times 5 =$ _____ | 46. | $30 \div 5 =$ _____ |
| 7. | $11 \times 5 =$ _____ | 27. | $10 \times 5 =$ _____ | 47. | $10 \div 5 =$ _____ |
| 8. | $12 \times 5 =$ _____ | 28. | $7 \times 5 =$ _____ | 48. | $5 \div 5 =$ _____ |
| 9. | $3 \times 5 =$ _____ | 29. | $2 \times 5 =$ _____ | 49. | $45 \div 5 =$ _____ |
| 10. | $1 \times 5 =$ _____ | 30. | $1 \times 5 =$ _____ | 50. | $55 \div 5 =$ _____ |
| 11. | $8 \times 5 =$ _____ | 31. | $10 \div 5 =$ _____ | 51. | $35 \div 5 =$ _____ |
| 12. | $6 \times 5 =$ _____ | 32. | $20 \div 5 =$ _____ | 52. | $20 \div 5 =$ _____ |
| 13. | $7 \times 5 =$ _____ | 33. | $25 \div 5 =$ _____ | 53. | $15 \div 5 =$ _____ |
| 14. | $9 \times 5 =$ _____ | 34. | $45 \div 5 =$ _____ | 54. | $40 \div 5 =$ _____ |
| 15. | $12 \times 5 =$ _____ | 35. | $50 \div 5 =$ _____ | 55. | $25 \div 5 =$ _____ |
| 16. | $11 \times 5 =$ _____ | 36. | $60 \div 5 =$ _____ | 56. | $60 \div 5 =$ _____ |
| 17. | $2 \times 5 =$ _____ | 37. | $35 \div 5 =$ _____ | 57. | $50 \div 5 =$ _____ |
| 18. | $1 \times 5 =$ _____ | 38. | $30 \div 5 =$ _____ | 58. | $30 \div 5 =$ _____ |
| 19. | $10 \times 5 =$ _____ | 39. | $15 \div 5 =$ _____ | 59. | $5 \div 5 =$ _____ |
| 20. | $9 \times 5 =$ _____ | 40. | $5 \div 5 =$ _____ | 60. | $10 \div 5 =$ _____ |

SCORE:
(5 minute limit)

/60

TIME TAKEN (optional)

<input type="text"/>	<input type="text"/>
MINUTES	SECONDS



Name: _____

Date: _____

MULTIPLICATION 1

Practise 5s

Complete first and then use it to help you if you get stuck.

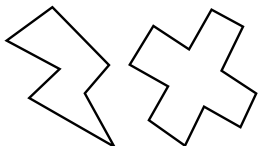
ROCK BOX

1.	$1 \times 5 =$	_____
2.	$2 \times 5 =$	_____
3.	$3 \times 5 =$	_____
4.	$4 \times 5 =$	_____
5.	$5 \times 5 =$	_____
6.	$6 \times 5 =$	_____
7.	$7 \times 5 =$	_____
8.	$8 \times 5 =$	_____
9.	$9 \times 5 =$	_____
10.	$10 \times 5 =$	_____
11.	$11 \times 5 =$	_____
12.	$12 \times 5 =$	_____

- | | | | | | |
|-----|-----------------|-------|-----|-----------------|-------|
| 21. | $11 \times 5 =$ | _____ | 41. | $9 \times 5 =$ | _____ |
| 22. | $4 \times 5 =$ | _____ | 42. | $5 \times 5 =$ | _____ |
| 23. | $10 \times 5 =$ | _____ | 43. | $3 \times 5 =$ | _____ |
| 24. | $8 \times 5 =$ | _____ | 44. | $2 \times 5 =$ | _____ |
| 25. | $9 \times 5 =$ | _____ | 45. | $12 \times 5 =$ | _____ |
| 26. | $1 \times 5 =$ | _____ | 46. | $10 \times 5 =$ | _____ |
| 27. | $3 \times 5 =$ | _____ | 47. | $11 \times 5 =$ | _____ |
| 28. | $12 \times 5 =$ | _____ | 48. | $1 \times 5 =$ | _____ |
| 29. | $4 \times 5 =$ | _____ | 49. | $5 \times 5 =$ | _____ |
| 30. | $9 \times 5 =$ | _____ | 50. | $7 \times 5 =$ | _____ |
| 31. | $8 \times 5 =$ | _____ | 51. | $8 \times 5 =$ | _____ |
| 32. | $7 \times 5 =$ | _____ | 52. | $11 \times 5 =$ | _____ |
| 33. | $11 \times 5 =$ | _____ | 53. | $10 \times 5 =$ | _____ |
| 34. | $7 \times 5 =$ | _____ | 54. | $6 \times 5 =$ | _____ |
| 35. | $1 \times 5 =$ | _____ | 55. | $9 \times 5 =$ | _____ |
| 36. | $12 \times 5 =$ | _____ | 56. | $4 \times 5 =$ | _____ |
| 37. | $2 \times 5 =$ | _____ | 57. | $3 \times 5 =$ | _____ |
| 38. | $5 \times 5 =$ | _____ | 58. | $6 \times 5 =$ | _____ |
| 39. | $4 \times 5 =$ | _____ | 59. | $9 \times 5 =$ | _____ |
| 40. | $6 \times 5 =$ | _____ | 60. | $11 \times 5 =$ | _____ |

Continue here...

- | | | |
|-----|-----------------|-------|
| 13. | $7 \times 5 =$ | _____ |
| 14. | $12 \times 5 =$ | _____ |
| 15. | $8 \times 5 =$ | _____ |
| 16. | $12 \times 5 =$ | _____ |
| 17. | $10 \times 5 =$ | _____ |
| 18. | $9 \times 5 =$ | _____ |
| 19. | $11 \times 5 =$ | _____ |
| 20. | $3 \times 5 =$ | _____ |



SCORE:

Grown-ups:
Can learners spot links between neighbouring questions?



Name: _____

Date: _____

MULTIPLICATION 2

Practise 5s

Complete first and then use it to help you if you get stuck.

ROCK BOX

1. $1 \times 5 =$ _____

2. $2 \times 5 =$ _____

3. $3 \times 5 =$ _____

4. $4 \times 5 =$ _____

5. $5 \times 5 =$ _____

6. $6 \times 5 =$ _____

7. $7 \times 5 =$ _____

8. $8 \times 5 =$ _____

9. $9 \times 5 =$ _____

10. $10 \times 5 =$ _____

11. $11 \times 5 =$ _____

12. $12 \times 5 =$ _____

13. $5 \times 1 =$ _____

14. $5 \times 2 =$ _____

15. $5 \times 3 =$ _____

16. $5 \times 4 =$ _____

17. $5 \times 5 =$ _____

18. $5 \times 6 =$ _____

19. $5 \times 7 =$ _____

20. $5 \times 8 =$ _____

21. $5 \times 9 =$ _____

22. $5 \times 10 =$ _____

23. $5 \times 11 =$ _____

24. $5 \times 12 =$ _____

41. $5 \times 3 =$ _____

42. $5 \times 5 =$ _____

43. $5 \times 8 =$ _____

44. $7 \times 5 =$ _____

45. $8 \times 5 =$ _____

46. $5 \times 12 =$ _____

47. $4 \times 5 =$ _____

48. $5 \times 2 =$ _____

49. $1 \times 5 =$ _____

50. $5 \times 5 =$ _____

51. $5 \times 11 =$ _____

52. $5 \times 1 =$ _____

53. $5 \times 12 =$ _____

54. $5 \times 7 =$ _____

55. $5 \times 9 =$ _____

56. $5 \times 6 =$ _____

57. $5 \times 5 =$ _____

58. $5 \times 10 =$ _____

59. $5 \times 3 =$ _____

60. $3 \times 5 =$ _____

Continue here...

25. $5 \times 4 =$ _____

26. $1 \times 5 =$ _____

27. $5 \times 5 =$ _____

28. $6 \times 5 =$ _____

29. $5 \times 6 =$ _____

30. $5 \times 5 =$ _____

31. $5 \times 2 =$ _____

32. $4 \times 5 =$ _____

33. $5 \times 7 =$ _____

34. $5 \times 8 =$ _____

35. $9 \times 5 =$ _____

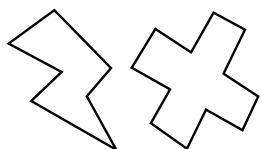
36. $5 \times 11 =$ _____

37. $12 \times 5 =$ _____

38. $11 \times 5 =$ _____

39. $2 \times 5 =$ _____

40. $5 \times 1 =$ _____



SCORE:

Grown-ups:
Can learners spot links between neighbouring questions?



Name: _____

Date: _____

MISSING NUMBER 1

Practise 5s

Complete first and then use it to help you if you get stuck.

ROCK BOX

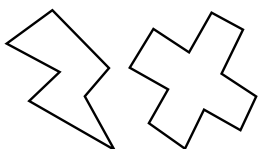
1.	_____	× 5 = 5
2.	_____	× 5 = 10
3.	_____	× 5 = 15
4.	_____	× 5 = 20
5.	_____	× 5 = 25
6.	_____	× 5 = 30
7.	_____	× 5 = 35
8.	_____	× 5 = 40
9.	_____	× 5 = 45
10.	_____	× 5 = 50
11.	_____	× 5 = 55
12.	_____	× 5 = 60

- 21. _____ × 5 = 25
- 22. _____ × 5 = 10
- 23. _____ × 5 = 30
- 24. _____ × 5 = 60
- 25. _____ × 5 = 50
- 26. _____ × 5 = 45
- 27. _____ × 5 = 55
- 28. _____ × 5 = 35
- 29. _____ × 5 = 20
- 30. _____ × 5 = 15
- 31. _____ × 5 = 5
- 32. _____ × 5 = 55
- 33. _____ × 5 = 40
- 34. _____ × 5 = 25
- 35. _____ × 5 = 5
- 36. _____ × 5 = 20
- 37. _____ × 5 = 30
- 38. _____ × 5 = 35
- 39. _____ × 5 = 45
- 40. _____ × 5 = 60

- 41. _____ × 5 = 10
- 42. _____ × 5 = 15
- 42. _____ × 5 = 5
- 44. _____ × 5 = 25
- 45. _____ × 5 = 35
- 46. _____ × 5 = 20
- 47. _____ × 5 = 40
- 48. _____ × 5 = 60
- 49. _____ × 5 = 50
- 50. _____ × 5 = 45
- 51. _____ × 5 = 30
- 52. _____ × 5 = 15
- 53. _____ × 5 = 55
- 54. _____ × 5 = 5
- 55. _____ × 5 = 10
- 56. _____ × 5 = 35
- 57. _____ × 5 = 25
- 58. _____ × 5 = 40
- 59. _____ × 5 = 45
- 60. _____ × 5 = 50

Continue here...

- 13. _____ × 5 = 20
- 14. _____ × 5 = 5
- 15. _____ × 5 = 50
- 16. _____ × 5 = 45
- 17. _____ × 5 = 60
- 18. _____ × 5 = 55
- 19. _____ × 5 = 40
- 20. _____ × 5 = 35



SCORE: _____



Grown-ups:
Can learners spot links between neighbouring questions?



Name: _____

Date: _____

MISSING NUMBER 2

Practise 5s

Complete first and then use it to help you if you get stuck.

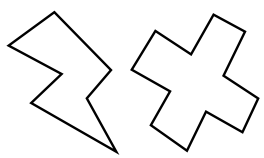
ROCK BOX			
1.	$\times 5 = 5$	2.	$\times 1 = 5$
3.	$\times 5 = 10$	4.	$\times 2 = 10$
5.	$\times 5 = 15$	6.	$\times 3 = 15$
7.	$\times 5 = 20$	8.	$\times 4 = 20$
9.	$\times 5 = 25$	10.	$\times 5 = 25$
11.	$\times 5 = 30$	12.	$\times 6 = 30$
13.	$\times 5 = 35$	14.	$\times 7 = 35$
15.	$\times 5 = 40$	16.	$\times 8 = 40$
17.	$\times 5 = 45$	18.	$\times 9 = 45$
19.	$\times 5 = 50$	20.	$\times 10 = 50$
21.	$\times 5 = 55$	22.	$\times 11 = 55$
23.	$\times 5 = 60$	24.	$\times 12 = 60$

Continue here...

- 25. _____ $\times 5 = 45$
- 26. _____ $\times 9 = 45$
- 27. _____ $\times 5 = 30$
- 28. _____ $\times 7 = 35$
- 29. _____ $\times 8 = 40$
- 30. _____ $\times 5 = 55$
- 31. _____ $\times 12 = 60$
- 32. _____ $\times 5 = 5$

- 33. _____ $\times 1 = 5$
- 34. _____ $\times 11 = 55$
- 35. _____ $\times 9 = 45$
- 36. _____ $\times 5 = 60$
- 37. _____ $\times 5 = 35$
- 38. _____ $\times 5 = 25$
- 39. _____ $\times 5 = 30$
- 40. _____ $\times 3 = 15$

- 41. _____ $\times 4 = 20$
- 42. _____ $\times 5 = 10$
- 43. _____ $\times 5 = 40$
- 44. _____ $\times 12 = 60$
- 45. _____ $\times 6 = 30$
- 46. _____ $\times 7 = 35$
- 47. _____ $\times 5 = 45$
- 48. _____ $\times 11 = 55$
- 49. _____ $\times 5 = 50$
- 50. _____ $\times 5 = 5$
- 51. _____ $\times 5 = 60$
- 52. _____ $\times 5 = 15$
- 53. _____ $\times 5 = 20$
- 54. _____ $\times 5 = 25$
- 55. _____ $\times 5 = 50$
- 56. _____ $\times 2 = 10$
- 57. _____ $\times 8 = 40$
- 58. _____ $\times 1 = 5$
- 59. _____ $\times 9 = 45$
- 60. _____ $\times 12 = 60$



SCORE:

Grown-ups:
Can learners spot links between neighbouring questions?



Name: _____

Date: _____

DIVISION 1

Practise 5s

Complete first and then use it to help you if you get stuck.

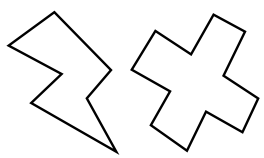
ROCK BOX

1.	$5 \div 5 =$	_____
2.	$10 \div 5 =$	_____
3.	$15 \div 5 =$	_____
4.	$20 \div 5 =$	_____
5.	$25 \div 5 =$	_____
6.	$30 \div 5 =$	_____
7.	$35 \div 5 =$	_____
8.	$40 \div 5 =$	_____
9.	$45 \div 5 =$	_____
10.	$50 \div 5 =$	_____
11.	$55 \div 5 =$	_____
12.	$60 \div 5 =$	_____

- | | | | | | |
|-----|---------------|-------|-----|---------------|-------|
| 21. | $55 \div 5 =$ | _____ | 41. | $45 \div 5 =$ | _____ |
| 22. | $45 \div 5 =$ | _____ | 42. | $40 \div 5 =$ | _____ |
| 23. | $25 \div 5 =$ | _____ | 43. | $10 \div 5 =$ | _____ |
| 24. | $20 \div 5 =$ | _____ | 44. | $30 \div 5 =$ | _____ |
| 25. | $15 \div 5 =$ | _____ | 45. | $35 \div 5 =$ | _____ |
| 26. | $30 \div 5 =$ | _____ | 46. | $30 \div 5 =$ | _____ |
| 27. | $60 \div 5 =$ | _____ | 47. | $25 \div 5 =$ | _____ |
| 28. | $40 \div 5 =$ | _____ | 48. | $40 \div 5 =$ | _____ |
| 29. | $20 \div 5 =$ | _____ | 49. | $10 \div 5 =$ | _____ |
| 30. | $50 \div 5 =$ | _____ | 50. | $5 \div 5 =$ | _____ |
| 31. | $55 \div 5 =$ | _____ | 51. | $20 \div 5 =$ | _____ |
| 32. | $45 \div 5 =$ | _____ | 52. | $45 \div 5 =$ | _____ |
| 33. | $35 \div 5 =$ | _____ | 53. | $15 \div 5 =$ | _____ |
| 34. | $5 \div 5 =$ | _____ | 54. | $40 \div 5 =$ | _____ |
| 35. | $25 \div 5 =$ | _____ | 55. | $55 \div 5 =$ | _____ |
| 36. | $40 \div 5 =$ | _____ | 56. | $50 \div 5 =$ | _____ |
| 37. | $60 \div 5 =$ | _____ | 57. | $60 \div 5 =$ | _____ |
| 38. | $15 \div 5 =$ | _____ | 58. | $35 \div 5 =$ | _____ |
| 39. | $5 \div 5 =$ | _____ | 59. | $25 \div 5 =$ | _____ |
| 40. | $30 \div 5 =$ | _____ | 60. | $30 \div 5 =$ | _____ |

Continue here...

- | | | |
|-----|---------------|-------|
| 13. | $60 \div 5 =$ | _____ |
| 14. | $40 \div 5 =$ | _____ |
| 15. | $50 \div 5 =$ | _____ |
| 16. | $30 \div 5 =$ | _____ |
| 17. | $55 \div 5 =$ | _____ |
| 18. | $5 \div 5 =$ | _____ |
| 19. | $15 \div 5 =$ | _____ |
| 20. | $35 \div 5 =$ | _____ |



SCORE: _____



Grown-ups:
Can learners spot links between neighbouring questions?



Name: _____

Date: _____

DIVISION 2

Practise 5s

Complete first and then use it to help you if you get stuck

ROCK BOX

1. $5 \div 5 =$

2. $5 \div 1 =$

3. $10 \div 5 =$

4. $10 \div 2 =$

5. $15 \div 5 =$

6. $15 \div 3 =$

7. $20 \div 5 =$

8. $20 \div 4 =$

9. $25 \div 5 =$

10. $25 \div 5 =$

11. $30 \div 5 =$

12. $30 \div 6 =$

13. $35 \div 5 =$

14. $35 \div 7 =$

15. $40 \div 5 =$

16. $40 \div 8 =$

17. $45 \div 5 =$

18. $45 \div 9 =$

19. $50 \div 5 =$

20. $50 \div 10 =$

21. $55 \div 5 =$

22. $55 \div 11 =$

23. $60 \div 5 =$

24. $60 \div 12 =$

41. $40 \div 8 =$ _____

42. $30 \div 6 =$ _____

43. $25 \div 5 =$ _____

44. $60 \div 12 =$ _____

45. $50 \div 5 =$ _____

46. $15 \div 5 =$ _____

47. $35 \div 5 =$ _____

48. $5 \div 1 =$ _____

49. $55 \div 5 =$ _____

50. $20 \div 4 =$ _____

51. $20 \div 5 =$ _____

52. $40 \div 5 =$ _____

53. $45 \div 9 =$ _____

54. $40 \div 8 =$ _____

55. $50 \div 5 =$ _____

56. $30 \div 5 =$ _____

57. $10 \div 2 =$ _____

58. $15 \div 3 =$ _____

59. $35 \div 5 =$ _____

60. $25 \div 5 =$ _____

Continue here...

25. $25 \div 5 =$ _____

33. $30 \div 6 =$ _____

26. $15 \div 5 =$ _____

34. $25 \div 5 =$ _____

27. $25 \div 5 =$ _____

35. $30 \div 5 =$ _____

28. $50 \div 5 =$ _____

36. $45 \div 9 =$ _____

29. $15 \div 3 =$ _____

37. $55 \div 11 =$ _____

30. $5 \div 5 =$ _____

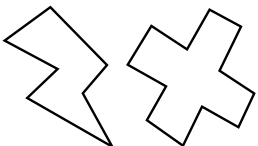
38. $45 \div 5 =$ _____

31. $5 \div 1 =$ _____

39. $20 \div 5 =$ _____

32. $10 \div 5 =$ _____

40. $35 \div 7 =$ _____



SCORE:

Grown-ups:
Can learners spot links between neighbouring questions?





CHECK 1



Name: _____

Date: _____

- | | | | | | |
|-----|-----------------------|-----|-----------------------|-----|---------------------|
| 1. | $8 \times 5 =$ _____ | 21. | $8 \times 5 =$ _____ | 41. | $10 \div 5 =$ _____ |
| 2. | $2 \times 5 =$ _____ | 22. | $10 \times 5 =$ _____ | 42. | $50 \div 5 =$ _____ |
| 3. | $5 \times 5 =$ _____ | 23. | $12 \times 5 =$ _____ | 43. | $40 \div 5 =$ _____ |
| 4. | $4 \times 5 =$ _____ | 24. | $9 \times 5 =$ _____ | 44. | $5 \div 5 =$ _____ |
| 5. | $3 \times 5 =$ _____ | 25. | $2 \times 5 =$ _____ | 45. | $25 \div 5 =$ _____ |
| 6. | $6 \times 5 =$ _____ | 26. | $1 \times 5 =$ _____ | 46. | $45 \div 5 =$ _____ |
| 7. | $7 \times 5 =$ _____ | 27. | $5 \times 5 =$ _____ | 47. | $35 \div 5 =$ _____ |
| 8. | $10 \times 5 =$ _____ | 28. | $4 \times 5 =$ _____ | 48. | $5 \div 5 =$ _____ |
| 9. | $12 \times 5 =$ _____ | 29. | $3 \times 5 =$ _____ | 49. | $50 \div 5 =$ _____ |
| 10. | $1 \times 5 =$ _____ | 30. | $6 \times 5 =$ _____ | 50. | $60 \div 5 =$ _____ |
| 11. | $9 \times 5 =$ _____ | 31. | $15 \div 5 =$ _____ | 51. | $20 \div 5 =$ _____ |
| 12. | $2 \times 5 =$ _____ | 32. | $30 \div 5 =$ _____ | 52. | $30 \div 5 =$ _____ |
| 13. | $11 \times 5 =$ _____ | 33. | $45 \div 5 =$ _____ | 53. | $25 \div 5 =$ _____ |
| 14. | $7 \times 5 =$ _____ | 34. | $25 \div 5 =$ _____ | 54. | $15 \div 5 =$ _____ |
| 15. | $9 \times 5 =$ _____ | 35. | $50 \div 5 =$ _____ | 55. | $50 \div 5 =$ _____ |
| 16. | $4 \times 5 =$ _____ | 36. | $5 \div 5 =$ _____ | 56. | $55 \div 5 =$ _____ |
| 17. | $3 \times 5 =$ _____ | 37. | $55 \div 5 =$ _____ | 57. | $45 \div 5 =$ _____ |
| 18. | $6 \times 5 =$ _____ | 38. | $60 \div 5 =$ _____ | 58. | $5 \div 5 =$ _____ |
| 19. | $1 \times 5 =$ _____ | 39. | $40 \div 5 =$ _____ | 59. | $10 \div 5 =$ _____ |
| 20. | $5 \times 5 =$ _____ | 40. | $60 \div 5 =$ _____ | 60. | $20 \div 5 =$ _____ |

SCORE:
(5 minute limit)

/60

TIME TAKEN (optional)

<input type="text"/>	<input type="text"/>
MINUTES	SECONDS



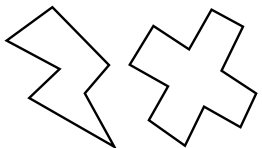
Name: _____

Date: _____

MULTIPLICATION 3

Practise 5s

- | | | | | | |
|-----|-----------------------|-----|-----------------------|-----|-----------------------|
| 1. | $5 \times 5 =$ _____ | 21. | $5 \times 8 =$ _____ | 41. | $1 \times 5 =$ _____ |
| 2. | $5 \times 3 =$ _____ | 22. | $5 \times 1 =$ _____ | 42. | $5 \times 12 =$ _____ |
| 3. | $3 \times 5 =$ _____ | 23. | $5 \times 2 =$ _____ | 43. | $11 \times 5 =$ _____ |
| 4. | $5 \times 7 =$ _____ | 24. | $4 \times 5 =$ _____ | 44. | $5 \times 7 =$ _____ |
| 5. | $5 \times 4 =$ _____ | 25. | $5 \times 6 =$ _____ | 45. | $5 \times 1 =$ _____ |
| 6. | $7 \times 5 =$ _____ | 26. | $9 \times 5 =$ _____ | 46. | $5 \times 3 =$ _____ |
| 7. | $5 \times 5 =$ _____ | 27. | $5 \times 12 =$ _____ | 47. | $12 \times 5 =$ _____ |
| 8. | $5 \times 8 =$ _____ | 28. | $11 \times 5 =$ _____ | 48. | $9 \times 5 =$ _____ |
| 9. | $9 \times 5 =$ _____ | 29. | $5 \times 1 =$ _____ | 49. | $5 \times 6 =$ _____ |
| 10. | $5 \times 11 =$ _____ | 30. | $10 \times 5 =$ _____ | 50. | $3 \times 5 =$ _____ |
| 11. | $12 \times 5 =$ _____ | 31. | $9 \times 5 =$ _____ | 51. | $5 \times 5 =$ _____ |
| 12. | $5 \times 12 =$ _____ | 32. | $5 \times 5 =$ _____ | 52. | $10 \times 5 =$ _____ |
| 13. | $1 \times 5 =$ _____ | 33. | $5 \times 3 =$ _____ | 53. | $5 \times 5 =$ _____ |
| 14. | $5 \times 10 =$ _____ | 34. | $5 \times 7 =$ _____ | 54. | $8 \times 5 =$ _____ |
| 15. | $5 \times 7 =$ _____ | 35. | $7 \times 5 =$ _____ | 55. | $5 \times 2 =$ _____ |
| 16. | $6 \times 5 =$ _____ | 36. | $5 \times 4 =$ _____ | 56. | $5 \times 4 =$ _____ |
| 17. | $3 \times 5 =$ _____ | 37. | $5 \times 3 =$ _____ | 57. | $7 \times 5 =$ _____ |
| 18. | $1 \times 5 =$ _____ | 38. | $2 \times 5 =$ _____ | 58. | $9 \times 5 =$ _____ |
| 19. | $4 \times 5 =$ _____ | 39. | $9 \times 5 =$ _____ | 59. | $5 \times 8 =$ _____ |
| 20. | $8 \times 5 =$ _____ | 40. | $5 \times 8 =$ _____ | 60. | $6 \times 5 =$ _____ |



SCORE:

Grown-ups:
Can learners spot links between neighbouring questions?



Name: _____

MISSING NUMBERS 3

Practise 5s

Date: _____

1. _____ $\times 5 = 55$

21. _____ $\times 5 = 20$

41. _____ $\times 5 = 5$

2. _____ $\times 5 = 60$

22. _____ $\times 12 = 60$

42. _____ $\times 11 = 55$

3. _____ $\times 7 = 35$

23. _____ $\times 5 = 40$

43. _____ $\times 5 = 40$

4. _____ $\times 5 = 25$

24. _____ $\times 7 = 35$

44. _____ $\times 9 = 45$

5. _____ $\times 9 = 45$

25. _____ $\times 5 = 25$

45. _____ $\times 5 = 45$

6. _____ $\times 6 = 30$

26. _____ $\times 6 = 30$

46. _____ $\times 5 = 50$

7. _____ $\times 5 = 30$

27. _____ $\times 5 = 10$

47. _____ $\times 5 = 20$

8. _____ $\times 4 = 20$

28. _____ $\times 1 = 5$

48. _____ $\times 2 = 10$

9. _____ $\times 9 = 45$

29. _____ $\times 5 = 50$

49. _____ $\times 1 = 5$

10. _____ $\times 3 = 15$

30. _____ $\times 5 = 55$

50. _____ $\times 5 = 40$

11. _____ $\times 5 = 10$

31. _____ $\times 9 = 45$

51. _____ $\times 6 = 30$

12. _____ $\times 1 = 5$

32. _____ $\times 4 = 20$

52. _____ $\times 4 = 20$

13. _____ $\times 5 = 5$

33. _____ $\times 5 = 15$

53. _____ $\times 5 = 25$

14. _____ $\times 5 = 50$

34. _____ $\times 5 = 50$

54. _____ $\times 5 = 35$

15. _____ $\times 5 = 55$

35. _____ $\times 5 = 15$

55. _____ $\times 9 = 45$

16. _____ $\times 7 = 35$

36. _____ $\times 5 = 25$

56. _____ $\times 5 = 55$

17. _____ $\times 5 = 25$

37. _____ $\times 5 = 45$

57. _____ $\times 12 = 60$

18. _____ $\times 8 = 40$

38. _____ $\times 4 = 20$

58. _____ $\times 5 = 60$

19. _____ $\times 5 = 20$

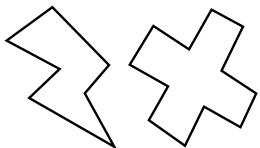
39. _____ $\times 5 = 5$

59. _____ $\times 5 = 15$

20. _____ $\times 5 = 35$

40. _____ $\times 6 = 30$

60. _____ $\times 9 = 45$



SCORE:

Grown-ups:
Can learners spot links between neighbouring questions?



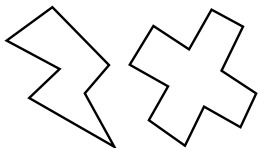
Name: _____

Date: _____

DIVISION 3

Practise 5s

- | | | | | | |
|-----|----------------------|-----|----------------------|-----|----------------------|
| 1. | $35 \div 7 =$ _____ | 21. | $60 \div 5 =$ _____ | 41. | $40 \div 5 =$ _____ |
| 2. | $35 \div 5 =$ _____ | 22. | $30 \div 5 =$ _____ | 42. | $45 \div 5 =$ _____ |
| 3. | $15 \div 3 =$ _____ | 23. | $45 \div 5 =$ _____ | 43. | $35 \div 7 =$ _____ |
| 4. | $10 \div 2 =$ _____ | 24. | $35 \div 7 =$ _____ | 44. | $55 \div 11 =$ _____ |
| 5. | $10 \div 5 =$ _____ | 25. | $15 \div 5 =$ _____ | 45. | $55 \div 5 =$ _____ |
| 6. | $20 \div 4 =$ _____ | 26. | $50 \div 5 =$ _____ | 46. | $5 \div 1 =$ _____ |
| 7. | $50 \div 5 =$ _____ | 27. | $25 \div 5 =$ _____ | 47. | $50 \div 5 =$ _____ |
| 8. | $55 \div 11 =$ _____ | 28. | $35 \div 5 =$ _____ | 48. | $45 \div 9 =$ _____ |
| 9. | $55 \div 5 =$ _____ | 29. | $20 \div 4 =$ _____ | 49. | $40 \div 8 =$ _____ |
| 10. | $35 \div 5 =$ _____ | 30. | $30 \div 5 =$ _____ | 50. | $20 \div 5 =$ _____ |
| 11. | $25 \div 5 =$ _____ | 31. | $20 \div 5 =$ _____ | 51. | $20 \div 4 =$ _____ |
| 12. | $60 \div 12 =$ _____ | 32. | $15 \div 3 =$ _____ | 52. | $30 \div 5 =$ _____ |
| 13. | $60 \div 5 =$ _____ | 33. | $45 \div 9 =$ _____ | 53. | $15 \div 5 =$ _____ |
| 14. | $40 \div 5 =$ _____ | 34. | $50 \div 5 =$ _____ | 54. | $35 \div 5 =$ _____ |
| 15. | $55 \div 5 =$ _____ | 35. | $55 \div 5 =$ _____ | 55. | $15 \div 3 =$ _____ |
| 16. | $25 \div 5 =$ _____ | 36. | $50 \div 5 =$ _____ | 56. | $60 \div 5 =$ _____ |
| 17. | $30 \div 6 =$ _____ | 37. | $60 \div 12 =$ _____ | 57. | $30 \div 5 =$ _____ |
| 18. | $15 \div 5 =$ _____ | 38. | $5 \div 1 =$ _____ | 58. | $25 \div 5 =$ _____ |
| 19. | $15 \div 3 =$ _____ | 39. | $5 \div 5 =$ _____ | 59. | $10 \div 2 =$ _____ |
| 20. | $45 \div 9 =$ _____ | 40. | $40 \div 8 =$ _____ | 60. | $10 \div 5 =$ _____ |



SCORE: _____



Grown-ups:
Can learners spot links between neighbouring questions?



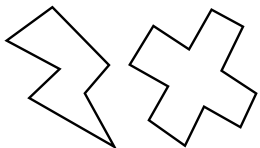
Name: _____

Date: _____

MULTIPLICATION 4

Practise 5s

- | | | | | | |
|-----|-----------------------|-----|-----------------------|-----|-----------------------|
| 1. | $12 \times 5 =$ _____ | 21. | $1 \times 5 =$ _____ | 41. | $5 \times 3 =$ _____ |
| 2. | $11 \times 5 =$ _____ | 22. | $5 \times 4 =$ _____ | 42. | $5 \times 2 =$ _____ |
| 3. | $5 \times 8 =$ _____ | 23. | $4 \times 5 =$ _____ | 43. | $8 \times 5 =$ _____ |
| 4. | $9 \times 5 =$ _____ | 24. | $5 \times 3 =$ _____ | 44. | $5 \times 4 =$ _____ |
| 5. | $5 \times 7 =$ _____ | 25. | $5 \times 6 =$ _____ | 45. | $5 \times 2 =$ _____ |
| 6. | $5 \times 5 =$ _____ | 26. | $9 \times 5 =$ _____ | 46. | $1 \times 5 =$ _____ |
| 7. | $6 \times 5 =$ _____ | 27. | $5 \times 8 =$ _____ | 47. | $11 \times 5 =$ _____ |
| 8. | $5 \times 4 =$ _____ | 28. | $5 \times 10 =$ _____ | 48. | $12 \times 5 =$ _____ |
| 9. | $3 \times 5 =$ _____ | 29. | $11 \times 5 =$ _____ | 49. | $5 \times 7 =$ _____ |
| 10. | $5 \times 3 =$ _____ | 30. | $5 \times 6 =$ _____ | 50. | $10 \times 5 =$ _____ |
| 11. | $6 \times 5 =$ _____ | 31. | $6 \times 5 =$ _____ | 51. | $4 \times 5 =$ _____ |
| 12. | $7 \times 5 =$ _____ | 32. | $9 \times 5 =$ _____ | 52. | $5 \times 9 =$ _____ |
| 13. | $10 \times 5 =$ _____ | 33. | $3 \times 5 =$ _____ | 53. | $6 \times 5 =$ _____ |
| 14. | $5 \times 12 =$ _____ | 34. | $5 \times 5 =$ _____ | 54. | $5 \times 8 =$ _____ |
| 15. | $11 \times 5 =$ _____ | 35. | $5 \times 8 =$ _____ | 55. | $4 \times 5 =$ _____ |
| 16. | $6 \times 5 =$ _____ | 36. | $5 \times 11 =$ _____ | 56. | $11 \times 5 =$ _____ |
| 17. | $5 \times 8 =$ _____ | 37. | $5 \times 10 =$ _____ | 57. | $5 \times 3 =$ _____ |
| 18. | $5 \times 3 =$ _____ | 38. | $1 \times 5 =$ _____ | 58. | $5 \times 10 =$ _____ |
| 19. | $2 \times 5 =$ _____ | 39. | $2 \times 5 =$ _____ | 59. | $5 \times 6 =$ _____ |
| 20. | $5 \times 1 =$ _____ | 40. | $5 \times 5 =$ _____ | 60. | $9 \times 5 =$ _____ |



SCORE:

Grown-ups:
Can learners spot links between neighbouring questions?



Name: _____

MISSING NUMBERS 4

Practise 5s

Date: _____

1. _____ \times 5 = 30

21. _____ \times 5 = 25

41. _____ \times 5 = 30

2. _____ \times 9 = 45

22. _____ \times 5 = 20

42. _____ \times 5 = 25

3. _____ \times 8 = 40

23. _____ \times 3 = 15

43. _____ \times 5 = 50

4. _____ \times 4 = 20

24. _____ \times 6 = 30

44. _____ \times 5 = 5

5. _____ \times 5 = 15

25. _____ \times 5 = 35

45. _____ \times 9 = 45

6. _____ \times 5 = 25

26. _____ \times 5 = 25

46. _____ \times 5 = 55

7. _____ \times 6 = 30

27. _____ \times 5 = 45

47. _____ \times 7 = 35

8. _____ \times 5 = 5

28. _____ \times 8 = 40

48. _____ \times 3 = 15

9. _____ \times 5 = 10

29. _____ \times 5 = 5

49. _____ \times 2 = 10

10. _____ \times 5 = 50

30. _____ \times 12 = 60

50. _____ \times 5 = 20

11. _____ \times 12 = 60

31. _____ \times 5 = 15

51. _____ \times 5 = 25

12. _____ \times 5 = 30

32. _____ \times 2 = 10

52. _____ \times 5 = 30

13. _____ \times 5 = 35

33. _____ \times 6 = 30

53. _____ \times 5 = 50

14. _____ \times 1 = 5

34. _____ \times 5 = 10

54. _____ \times 12 = 60

15. _____ \times 5 = 10

35. _____ \times 5 = 5

55. _____ \times 1 = 5

16. _____ \times 5 = 55

36. _____ \times 12 = 60

56. _____ \times 5 = 50

17. _____ \times 9 = 45

37. _____ \times 9 = 45

57. _____ \times 9 = 45

18. _____ \times 5 = 50

38. _____ \times 5 = 20

58. _____ \times 5 = 20

19. _____ \times 6 = 30

39. _____ \times 5 = 15

59. _____ \times 5 = 35

20. _____ \times 5 = 35

40. _____ \times 8 = 40

60. _____ \times 7 = 35



SCORE:

Grown-ups:
Can learners spot links between neighbouring questions?



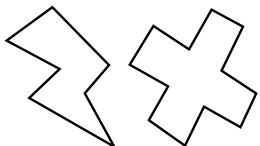
Name: _____

Date: _____

DIVISION 4

Practise 5s

- | | | | | | |
|-----|----------------------|-----|----------------------|-----|----------------------|
| 1. | $60 \div 5 =$ _____ | 21. | $50 \div 5 =$ _____ | 41. | $60 \div 5 =$ _____ |
| 2. | $55 \div 5 =$ _____ | 22. | $60 \div 5 =$ _____ | 42. | $5 \div 1 =$ _____ |
| 3. | $5 \div 1 =$ _____ | 23. | $55 \div 11 =$ _____ | 43. | $5 \div 5 =$ _____ |
| 4. | $5 \div 5 =$ _____ | 24. | $35 \div 5 =$ _____ | 44. | $20 \div 5 =$ _____ |
| 5. | $45 \div 9 =$ _____ | 25. | $35 \div 7 =$ _____ | 45. | $35 \div 7 =$ _____ |
| 6. | $40 \div 5 =$ _____ | 26. | $20 \div 5 =$ _____ | 46. | $35 \div 5 =$ _____ |
| 7. | $25 \div 5 =$ _____ | 27. | $25 \div 5 =$ _____ | 47. | $45 \div 9 =$ _____ |
| 8. | $30 \div 6 =$ _____ | 28. | $45 \div 5 =$ _____ | 48. | $50 \div 5 =$ _____ |
| 9. | $35 \div 7 =$ _____ | 29. | $45 \div 9 =$ _____ | 49. | $55 \div 5 =$ _____ |
| 10. | $50 \div 5 =$ _____ | 30. | $40 \div 5 =$ _____ | 50. | $10 \div 5 =$ _____ |
| 11. | $15 \div 3 =$ _____ | 31. | $30 \div 5 =$ _____ | 51. | $55 \div 11 =$ _____ |
| 12. | $10 \div 2 =$ _____ | 32. | $20 \div 4 =$ _____ | 52. | $15 \div 5 =$ _____ |
| 13. | $25 \div 5 =$ _____ | 33. | $5 \div 5 =$ _____ | 53. | $60 \div 12 =$ _____ |
| 14. | $30 \div 5 =$ _____ | 34. | $25 \div 5 =$ _____ | 54. | $20 \div 5 =$ _____ |
| 15. | $45 \div 5 =$ _____ | 35. | $35 \div 7 =$ _____ | 55. | $35 \div 5 =$ _____ |
| 16. | $20 \div 5 =$ _____ | 36. | $10 \div 5 =$ _____ | 56. | $30 \div 6 =$ _____ |
| 17. | $20 \div 4 =$ _____ | 37. | $45 \div 9 =$ _____ | 57. | $5 \div 5 =$ _____ |
| 18. | $40 \div 8 =$ _____ | 38. | $15 \div 5 =$ _____ | 58. | $10 \div 2 =$ _____ |
| 19. | $5 \div 5 =$ _____ | 39. | $55 \div 11 =$ _____ | 59. | $50 \div 5 =$ _____ |
| 20. | $60 \div 12 =$ _____ | 40. | $30 \div 6 =$ _____ | 60. | $5 \div 1 =$ _____ |



SCORE:

Grown-ups:
Can learners spot links between neighbouring questions?





CHECK 2



Name: _____

Date: _____

- | | | | | | |
|-----|-----------------------|-----|-----------------------|-----|---------------------|
| 1. | $9 \times 5 =$ _____ | 21. | $3 \times 5 =$ _____ | 41. | $5 \div 5 =$ _____ |
| 2. | $4 \times 5 =$ _____ | 22. | $10 \times 5 =$ _____ | 42. | $45 \div 5 =$ _____ |
| 3. | $12 \times 5 =$ _____ | 23. | $2 \times 5 =$ _____ | 43. | $35 \div 5 =$ _____ |
| 4. | $3 \times 5 =$ _____ | 24. | $4 \times 5 =$ _____ | 44. | $55 \div 5 =$ _____ |
| 5. | $6 \times 5 =$ _____ | 25. | $8 \times 5 =$ _____ | 45. | $10 \div 5 =$ _____ |
| 6. | $10 \times 5 =$ _____ | 26. | $6 \times 5 =$ _____ | 46. | $50 \div 5 =$ _____ |
| 7. | $12 \times 5 =$ _____ | 27. | $12 \times 5 =$ _____ | 47. | $60 \div 5 =$ _____ |
| 8. | $2 \times 5 =$ _____ | 28. | $5 \times 5 =$ _____ | 48. | $5 \div 5 =$ _____ |
| 9. | $1 \times 5 =$ _____ | 29. | $1 \times 5 =$ _____ | 49. | $15 \div 5 =$ _____ |
| 10. | $8 \times 5 =$ _____ | 30. | $7 \times 5 =$ _____ | 50. | $40 \div 5 =$ _____ |
| 11. | $4 \times 5 =$ _____ | 31. | $45 \div 5 =$ _____ | 51. | $20 \div 5 =$ _____ |
| 12. | $5 \times 5 =$ _____ | 32. | $25 \div 5 =$ _____ | 52. | $35 \div 5 =$ _____ |
| 13. | $7 \times 5 =$ _____ | 33. | $20 \div 5 =$ _____ | 53. | $15 \div 5 =$ _____ |
| 14. | $6 \times 5 =$ _____ | 34. | $50 \div 5 =$ _____ | 54. | $55 \div 5 =$ _____ |
| 15. | $10 \times 5 =$ _____ | 35. | $55 \div 5 =$ _____ | 55. | $50 \div 5 =$ _____ |
| 16. | $12 \times 5 =$ _____ | 36. | $15 \div 5 =$ _____ | 56. | $25 \div 5 =$ _____ |
| 17. | $1 \times 5 =$ _____ | 37. | $30 \div 5 =$ _____ | 57. | $10 \div 5 =$ _____ |
| 18. | $11 \times 5 =$ _____ | 38. | $35 \div 5 =$ _____ | 58. | $35 \div 5 =$ _____ |
| 19. | $9 \times 5 =$ _____ | 39. | $25 \div 5 =$ _____ | 59. | $30 \div 5 =$ _____ |
| 20. | $7 \times 5 =$ _____ | 40. | $40 \div 5 =$ _____ | 60. | $5 \div 5 =$ _____ |

SCORE:
(5 minute limit)

/60

TIME TAKEN (optional)

<input type="text"/>	<input type="text"/>
MINUTES	SECONDS

