

NAME: _____

4S



SPARK

SCORE

BASELINE

CHECK 1

CHECK 2



BASELINE



Name: _____

Date: _____

- | | | | | | |
|-----|-----------------------|-----|-----------------------|-----|---------------------|
| 1. | $5 \times 4 =$ _____ | 21. | $8 \times 4 =$ _____ | 41. | $40 \div 4 =$ _____ |
| 2. | $7 \times 4 =$ _____ | 22. | $5 \times 4 =$ _____ | 42. | $44 \div 4 =$ _____ |
| 3. | $8 \times 4 =$ _____ | 23. | $3 \times 4 =$ _____ | 43. | $32 \div 4 =$ _____ |
| 4. | $4 \times 4 =$ _____ | 24. | $4 \times 4 =$ _____ | 44. | $20 \div 4 =$ _____ |
| 5. | $3 \times 4 =$ _____ | 25. | $6 \times 4 =$ _____ | 45. | $28 \div 4 =$ _____ |
| 6. | $9 \times 4 =$ _____ | 26. | $9 \times 4 =$ _____ | 46. | $24 \div 4 =$ _____ |
| 7. | $11 \times 4 =$ _____ | 27. | $10 \times 4 =$ _____ | 47. | $8 \div 4 =$ _____ |
| 8. | $12 \times 4 =$ _____ | 28. | $7 \times 4 =$ _____ | 48. | $4 \div 4 =$ _____ |
| 9. | $3 \times 4 =$ _____ | 29. | $2 \times 4 =$ _____ | 49. | $36 \div 4 =$ _____ |
| 10. | $1 \times 4 =$ _____ | 30. | $1 \times 4 =$ _____ | 50. | $44 \div 4 =$ _____ |
| 11. | $8 \times 4 =$ _____ | 31. | $8 \div 4 =$ _____ | 51. | $28 \div 4 =$ _____ |
| 12. | $6 \times 4 =$ _____ | 32. | $16 \div 4 =$ _____ | 52. | $16 \div 4 =$ _____ |
| 13. | $7 \times 4 =$ _____ | 33. | $20 \div 4 =$ _____ | 53. | $12 \div 4 =$ _____ |
| 14. | $9 \times 4 =$ _____ | 34. | $36 \div 4 =$ _____ | 54. | $32 \div 4 =$ _____ |
| 15. | $12 \times 4 =$ _____ | 35. | $40 \div 4 =$ _____ | 55. | $20 \div 4 =$ _____ |
| 16. | $11 \times 4 =$ _____ | 36. | $48 \div 4 =$ _____ | 56. | $48 \div 4 =$ _____ |
| 17. | $2 \times 4 =$ _____ | 37. | $28 \div 4 =$ _____ | 57. | $40 \div 4 =$ _____ |
| 18. | $1 \times 4 =$ _____ | 38. | $24 \div 4 =$ _____ | 58. | $24 \div 4 =$ _____ |
| 19. | $10 \times 4 =$ _____ | 39. | $12 \div 4 =$ _____ | 59. | $4 \div 4 =$ _____ |
| 20. | $9 \times 4 =$ _____ | 40. | $4 \div 4 =$ _____ | 60. | $8 \div 4 =$ _____ |

SCORE:
(5 minute limit)

/60

TIME TAKEN (optional)

<input type="text"/>	<input type="text"/>
MINUTES	SECONDS



Name: _____

Date: _____

MULTIPLICATION 1

Practise 4s

Complete first and then use it to help you if you get stuck.

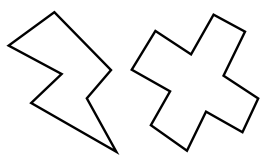
ROCK BOX

1.	$1 \times 4 =$	_____
2.	$2 \times 4 =$	_____
3.	$3 \times 4 =$	_____
4.	$4 \times 4 =$	_____
5.	$5 \times 4 =$	_____
6.	$6 \times 4 =$	_____
7.	$7 \times 4 =$	_____
8.	$8 \times 4 =$	_____
9.	$9 \times 4 =$	_____
10.	$10 \times 4 =$	_____
11.	$11 \times 4 =$	_____
12.	$12 \times 4 =$	_____

- | | | | | | |
|-----|-----------------|-------|-----|-----------------|-------|
| 21. | $11 \times 4 =$ | _____ | 41. | $9 \times 4 =$ | _____ |
| 22. | $4 \times 4 =$ | _____ | 42. | $5 \times 4 =$ | _____ |
| 23. | $10 \times 4 =$ | _____ | 43. | $3 \times 4 =$ | _____ |
| 24. | $8 \times 4 =$ | _____ | 44. | $2 \times 4 =$ | _____ |
| 25. | $9 \times 4 =$ | _____ | 45. | $12 \times 4 =$ | _____ |
| 26. | $1 \times 4 =$ | _____ | 46. | $10 \times 4 =$ | _____ |
| 27. | $3 \times 4 =$ | _____ | 47. | $11 \times 4 =$ | _____ |
| 28. | $12 \times 4 =$ | _____ | 48. | $1 \times 4 =$ | _____ |
| 29. | $4 \times 4 =$ | _____ | 49. | $5 \times 4 =$ | _____ |
| 30. | $9 \times 4 =$ | _____ | 50. | $7 \times 4 =$ | _____ |
| 31. | $8 \times 4 =$ | _____ | 51. | $8 \times 4 =$ | _____ |
| 32. | $7 \times 4 =$ | _____ | 52. | $11 \times 4 =$ | _____ |
| 33. | $11 \times 4 =$ | _____ | 53. | $10 \times 4 =$ | _____ |
| 34. | $7 \times 4 =$ | _____ | 54. | $6 \times 4 =$ | _____ |
| 35. | $1 \times 4 =$ | _____ | 55. | $9 \times 4 =$ | _____ |
| 36. | $12 \times 4 =$ | _____ | 56. | $4 \times 4 =$ | _____ |
| 37. | $2 \times 4 =$ | _____ | 57. | $3 \times 4 =$ | _____ |
| 38. | $5 \times 4 =$ | _____ | 58. | $6 \times 4 =$ | _____ |
| 39. | $4 \times 4 =$ | _____ | 59. | $9 \times 4 =$ | _____ |
| 40. | $6 \times 4 =$ | _____ | 60. | $11 \times 4 =$ | _____ |

Continue here...

- | | | |
|-----|-----------------|-------|
| 13. | $7 \times 4 =$ | _____ |
| 14. | $12 \times 4 =$ | _____ |
| 15. | $8 \times 4 =$ | _____ |
| 16. | $12 \times 4 =$ | _____ |
| 17. | $10 \times 4 =$ | _____ |
| 18. | $9 \times 4 =$ | _____ |
| 19. | $11 \times 4 =$ | _____ |
| 20. | $3 \times 4 =$ | _____ |



SCORE:

Grown-ups:
Can learners spot links between neighbouring questions?



Name: _____

Date: _____

MULTIPLICATION 2

Practise 4s

Complete first and then use it to help you if you get stuck.

ROCK BOX

1. $1 \times 4 =$ _____

2. $2 \times 4 =$ _____

3. $3 \times 4 =$ _____

4. $4 \times 4 =$ _____

5. $5 \times 4 =$ _____

6. $6 \times 4 =$ _____

7. $7 \times 4 =$ _____

8. $8 \times 4 =$ _____

9. $9 \times 4 =$ _____

10. $10 \times 4 =$ _____

11. $11 \times 4 =$ _____

12. $12 \times 4 =$ _____

13. $4 \times 1 =$ _____

14. $4 \times 2 =$ _____

15. $4 \times 3 =$ _____

16. $4 \times 4 =$ _____

17. $4 \times 5 =$ _____

18. $4 \times 6 =$ _____

19. $4 \times 7 =$ _____

20. $4 \times 8 =$ _____

21. $4 \times 9 =$ _____

22. $4 \times 10 =$ _____

23. $4 \times 11 =$ _____

24. $4 \times 12 =$ _____

41. $4 \times 3 =$ _____

42. $5 \times 4 =$ _____

43. $4 \times 8 =$ _____

44. $7 \times 4 =$ _____

45. $8 \times 4 =$ _____

46. $4 \times 12 =$ _____

47. $4 \times 4 =$ _____

48. $4 \times 2 =$ _____

49. $1 \times 4 =$ _____

50. $4 \times 5 =$ _____

51. $4 \times 11 =$ _____

52. $4 \times 1 =$ _____

Continue here...

25. $4 \times 4 =$ _____

26. $1 \times 4 =$ _____

27. $4 \times 5 =$ _____

28. $6 \times 4 =$ _____

29. $4 \times 6 =$ _____

30. $5 \times 4 =$ _____

31. $4 \times 2 =$ _____

32. $4 \times 4 =$ _____

33. $4 \times 7 =$ _____

34. $4 \times 8 =$ _____

35. $9 \times 4 =$ _____

36. $4 \times 11 =$ _____

37. $12 \times 4 =$ _____

38. $11 \times 4 =$ _____

39. $2 \times 4 =$ _____

40. $4 \times 1 =$ _____

53. $4 \times 12 =$ _____

54. $4 \times 7 =$ _____

55. $4 \times 9 =$ _____

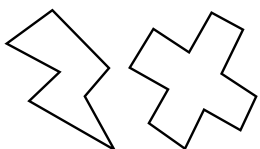
56. $4 \times 6 =$ _____

57. $4 \times 5 =$ _____

58. $4 \times 10 =$ _____

59. $4 \times 3 =$ _____

60. $3 \times 4 =$ _____



SCORE:

Grown-ups:
Can learners spot links between neighbouring questions?



Name: _____

Date: _____

MISSING NUMBER 1

Practise 4s

Complete first and then use it to help you if you get stuck.

ROCK BOX

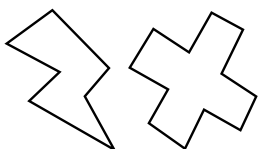
1.	_____	× 4 = 4
2.	_____	× 4 = 8
3.	_____	× 4 = 12
4.	_____	× 4 = 16
5.	_____	× 4 = 20
6.	_____	× 4 = 24
7.	_____	× 4 = 28
8.	_____	× 4 = 32
9.	_____	× 4 = 36
10.	_____	× 4 = 40
11.	_____	× 4 = 44
12.	_____	× 4 = 48

- 21. _____ × 4 = 20
- 22. _____ × 4 = 8
- 23. _____ × 4 = 24
- 24. _____ × 4 = 48
- 25. _____ × 4 = 40
- 26. _____ × 4 = 36
- 27. _____ × 4 = 44
- 28. _____ × 4 = 28
- 29. _____ × 4 = 16
- 30. _____ × 4 = 12
- 31. _____ × 4 = 4
- 32. _____ × 4 = 44
- 33. _____ × 4 = 32
- 34. _____ × 4 = 20
- 35. _____ × 4 = 4
- 36. _____ × 4 = 16
- 37. _____ × 4 = 24
- 38. _____ × 4 = 28
- 39. _____ × 4 = 36
- 40. _____ × 4 = 48

- 41. _____ × 4 = 8
- 42. _____ × 4 = 12
- 42. _____ × 4 = 4
- 44. _____ × 4 = 20
- 45. _____ × 4 = 28
- 46. _____ × 4 = 16
- 47. _____ × 4 = 32
- 48. _____ × 4 = 48
- 49. _____ × 4 = 40
- 50. _____ × 4 = 36
- 51. _____ × 4 = 24
- 52. _____ × 4 = 12
- 53. _____ × 4 = 44
- 54. _____ × 4 = 4
- 55. _____ × 4 = 8
- 56. _____ × 4 = 28
- 57. _____ × 4 = 20
- 58. _____ × 4 = 32
- 59. _____ × 4 = 36
- 60. _____ × 4 = 40

Continue here...

- 13. _____ × 4 = 16
- 14. _____ × 4 = 4
- 15. _____ × 4 = 40
- 16. _____ × 4 = 36
- 17. _____ × 4 = 48
- 18. _____ × 4 = 44
- 19. _____ × 4 = 32
- 20. _____ × 4 = 28



SCORE: _____



Grown-ups:
Can learners spot links between neighbouring questions?



Name: _____

Date: _____

MISSING NUMBER 2

Practise 4s

Complete first and then use it to help you if you get stuck.

ROCK BOX			
1.	$\times 4 = 4$	2.	$\times 1 = 4$
3.	$\times 4 = 8$	4.	$\times 2 = 8$
5.	$\times 4 = 12$	6.	$\times 3 = 12$
7.	$\times 4 = 16$	8.	$\times 4 = 16$
9.	$\times 4 = 20$	10.	$\times 5 = 20$
11.	$\times 4 = 24$	12.	$\times 6 = 24$
13.	$\times 4 = 28$	14.	$\times 7 = 28$
15.	$\times 4 = 32$	16.	$\times 8 = 32$
17.	$\times 4 = 36$	18.	$\times 9 = 36$
19.	$\times 4 = 40$	20.	$\times 10 = 40$
21.	$\times 4 = 44$	22.	$\times 11 = 44$
23.	$\times 4 = 48$	24.	$\times 12 = 48$

Continue here...

25. _____ $\times 4 = 36$

33. _____ $\times 1 = 4$

26. _____ $\times 9 = 36$

34. _____ $\times 11 = 44$

27. _____ $\times 4 = 24$

35. _____ $\times 9 = 36$

28. _____ $\times 7 = 28$

36. _____ $\times 4 = 48$

29. _____ $\times 8 = 32$

37. _____ $\times 4 = 28$

30. _____ $\times 4 = 44$

38. _____ $\times 5 = 20$

31. _____ $\times 12 = 48$

39. _____ $\times 4 = 24$

32. _____ $\times 4 = 4$

40. _____ $\times 3 = 12$

41. _____ $\times 4 = 16$

42. _____ $\times 4 = 8$

43. _____ $\times 4 = 32$

44. _____ $\times 12 = 48$

45. _____ $\times 6 = 24$

46. _____ $\times 7 = 28$

47. _____ $\times 4 = 36$

48. _____ $\times 11 = 44$

49. _____ $\times 4 = 40$

50. _____ $\times 4 = 4$

51. _____ $\times 4 = 48$

52. _____ $\times 4 = 12$

53. _____ $\times 4 = 16$

54. _____ $\times 4 = 20$

55. _____ $\times 4 = 40$

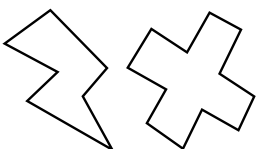
56. _____ $\times 2 = 8$

57. _____ $\times 8 = 32$

58. _____ $\times 1 = 4$

59. _____ $\times 9 = 36$

60. _____ $\times 12 = 48$



SCORE:

Grown-ups:
Can learners spot links between neighbouring questions?



Name: _____

Date: _____

DIVISION 1

Practise 4s

Complete first and then use it to help you if you get stuck.

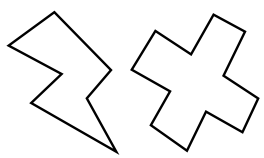
ROCK BOX

1.	$4 \div 4 =$	_____
2.	$8 \div 4 =$	_____
3.	$12 \div 4 =$	_____
4.	$16 \div 4 =$	_____
5.	$20 \div 4 =$	_____
6.	$24 \div 4 =$	_____
7.	$28 \div 4 =$	_____
8.	$32 \div 4 =$	_____
9.	$36 \div 4 =$	_____
10.	$40 \div 4 =$	_____
11.	$44 \div 4 =$	_____
12.	$48 \div 4 =$	_____

- | | | | | | |
|-----|---------------|-------|-----|---------------|-------|
| 21. | $44 \div 4 =$ | _____ | 41. | $36 \div 4 =$ | _____ |
| 22. | $36 \div 4 =$ | _____ | 42. | $32 \div 4 =$ | _____ |
| 23. | $20 \div 4 =$ | _____ | 43. | $8 \div 4 =$ | _____ |
| 24. | $16 \div 4 =$ | _____ | 44. | $24 \div 4 =$ | _____ |
| 25. | $12 \div 4 =$ | _____ | 45. | $28 \div 4 =$ | _____ |
| 26. | $24 \div 4 =$ | _____ | 46. | $24 \div 4 =$ | _____ |
| 27. | $48 \div 4 =$ | _____ | 47. | $20 \div 4 =$ | _____ |
| 28. | $32 \div 4 =$ | _____ | 48. | $32 \div 4 =$ | _____ |
| 29. | $16 \div 4 =$ | _____ | 49. | $8 \div 4 =$ | _____ |
| 30. | $40 \div 4 =$ | _____ | 50. | $4 \div 4 =$ | _____ |
| 31. | $44 \div 4 =$ | _____ | 51. | $16 \div 4 =$ | _____ |
| 32. | $36 \div 4 =$ | _____ | 52. | $36 \div 4 =$ | _____ |
| 33. | $28 \div 4 =$ | _____ | 53. | $12 \div 4 =$ | _____ |
| 34. | $4 \div 4 =$ | _____ | 54. | $32 \div 4 =$ | _____ |
| 35. | $20 \div 4 =$ | _____ | 55. | $44 \div 4 =$ | _____ |
| 36. | $32 \div 4 =$ | _____ | 56. | $40 \div 4 =$ | _____ |
| 37. | $48 \div 4 =$ | _____ | 57. | $48 \div 4 =$ | _____ |
| 38. | $12 \div 4 =$ | _____ | 58. | $28 \div 4 =$ | _____ |
| 39. | $4 \div 4 =$ | _____ | 59. | $20 \div 4 =$ | _____ |
| 40. | $24 \div 4 =$ | _____ | 60. | $24 \div 4 =$ | _____ |

Continue here...

- | | | |
|-----|---------------|-------|
| 13. | $48 \div 4 =$ | _____ |
| 14. | $32 \div 4 =$ | _____ |
| 15. | $40 \div 4 =$ | _____ |
| 16. | $24 \div 4 =$ | _____ |
| 17. | $44 \div 4 =$ | _____ |
| 18. | $4 \div 4 =$ | _____ |
| 19. | $12 \div 4 =$ | _____ |
| 20. | $28 \div 4 =$ | _____ |



SCORE:

Grown-ups:
Can learners spot links between neighbouring questions?



Name: _____

Date: _____

DIVISION 2

Practise 4s

Complete first and then use it to help you if you get stuck

ROCK BOX

1. $4 \div 4 =$

2. $4 \div 1 =$

3. $8 \div 4 =$

4. $8 \div 2 =$

5. $12 \div 4 =$

6. $12 \div 3 =$

7. $16 \div 4 =$

8. $16 \div 4 =$

9. $20 \div 4 =$

10. $20 \div 5 =$

11. $24 \div 4 =$

12. $24 \div 6 =$

13. $28 \div 4 =$

14. $28 \div 7 =$

15. $32 \div 4 =$

16. $32 \div 8 =$

17. $36 \div 4 =$

18. $36 \div 9 =$

19. $40 \div 4 =$

20. $40 \div 10 =$

21. $44 \div 4 =$

22. $44 \div 11 =$

23. $48 \div 4 =$

24. $48 \div 12 =$

41. $32 \div 8 =$

42. $24 \div 6 =$

43. $20 \div 4 =$

44. $48 \div 12 =$

45. $40 \div 4 =$

46. $12 \div 4 =$

47. $28 \div 4 =$

48. $4 \div 1 =$

49. $44 \div 4 =$

50. $16 \div 4 =$

51. $36 \div 4 =$

52. $32 \div 4 =$

53. $36 \div 9 =$

54. $32 \div 8 =$

55. $40 \div 4 =$

56. $24 \div 4 =$

57. $8 \div 2 =$

58. $12 \div 3 =$

59. $28 \div 4 =$

60. $20 \div 5 =$

Continue here...

25. $20 \div 5 =$

33. $24 \div 6 =$

26. $12 \div 4 =$

34. $20 \div 4 =$

27. $20 \div 4 =$

35. $24 \div 4 =$

28. $40 \div 4 =$

36. $36 \div 9 =$

29. $12 \div 3 =$

37. $44 \div 11 =$

30. $4 \div 4 =$

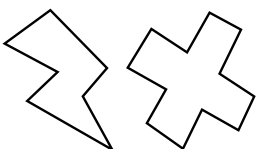
38. $36 \div 4 =$

31. $4 \div 1 =$

39. $16 \div 4 =$

32. $8 \div 4 =$

40. $28 \div 7 =$



SCORE:

Grown-ups:
Can learners spot links between neighbouring questions?





CHECK 1



Name: _____

Date: _____

- | | | | | | |
|-----|-----------------------|-----|-----------------------|-----|---------------------|
| 1. | $8 \times 4 =$ _____ | 21. | $8 \times 4 =$ _____ | 41. | $8 \div 4 =$ _____ |
| 2. | $2 \times 4 =$ _____ | 22. | $10 \times 4 =$ _____ | 42. | $40 \div 4 =$ _____ |
| 3. | $5 \times 4 =$ _____ | 23. | $12 \times 4 =$ _____ | 43. | $32 \div 4 =$ _____ |
| 4. | $4 \times 4 =$ _____ | 24. | $9 \times 4 =$ _____ | 44. | $4 \div 4 =$ _____ |
| 5. | $3 \times 4 =$ _____ | 25. | $2 \times 4 =$ _____ | 45. | $20 \div 4 =$ _____ |
| 6. | $6 \times 4 =$ _____ | 26. | $1 \times 4 =$ _____ | 46. | $36 \div 4 =$ _____ |
| 7. | $7 \times 4 =$ _____ | 27. | $5 \times 4 =$ _____ | 47. | $28 \div 4 =$ _____ |
| 8. | $10 \times 4 =$ _____ | 28. | $4 \times 4 =$ _____ | 48. | $4 \div 4 =$ _____ |
| 9. | $12 \times 4 =$ _____ | 29. | $3 \times 4 =$ _____ | 49. | $40 \div 4 =$ _____ |
| 10. | $1 \times 4 =$ _____ | 30. | $6 \times 4 =$ _____ | 50. | $48 \div 4 =$ _____ |
| 11. | $9 \times 4 =$ _____ | 31. | $12 \div 4 =$ _____ | 51. | $16 \div 4 =$ _____ |
| 12. | $2 \times 4 =$ _____ | 32. | $24 \div 4 =$ _____ | 52. | $24 \div 4 =$ _____ |
| 13. | $11 \times 4 =$ _____ | 33. | $36 \div 4 =$ _____ | 53. | $20 \div 4 =$ _____ |
| 14. | $7 \times 4 =$ _____ | 34. | $20 \div 4 =$ _____ | 54. | $12 \div 4 =$ _____ |
| 15. | $9 \times 4 =$ _____ | 35. | $40 \div 4 =$ _____ | 55. | $40 \div 4 =$ _____ |
| 16. | $4 \times 4 =$ _____ | 36. | $4 \div 4 =$ _____ | 56. | $44 \div 4 =$ _____ |
| 17. | $3 \times 4 =$ _____ | 37. | $44 \div 4 =$ _____ | 57. | $36 \div 4 =$ _____ |
| 18. | $6 \times 4 =$ _____ | 38. | $48 \div 4 =$ _____ | 58. | $4 \div 4 =$ _____ |
| 19. | $1 \times 4 =$ _____ | 39. | $32 \div 4 =$ _____ | 59. | $8 \div 4 =$ _____ |
| 20. | $5 \times 4 =$ _____ | 40. | $16 \div 4 =$ _____ | 60. | $16 \div 4 =$ _____ |

SCORE:
(5 minute limit)

/60

TIME TAKEN (optional)

<input type="text"/>	<input type="text"/>
MINUTES	SECONDS



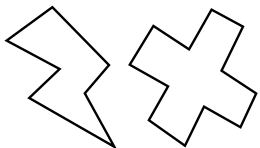
Name: _____

Date: _____


MULTIPLICATION 3

Practise 4s

- | | | | | | |
|-----|-----------------------|-----|-----------------------|-----|-----------------------|
| 1. | $4 \times 5 =$ _____ | 21. | $4 \times 8 =$ _____ | 41. | $1 \times 4 =$ _____ |
| 2. | $4 \times 3 =$ _____ | 22. | $4 \times 1 =$ _____ | 42. | $4 \times 12 =$ _____ |
| 3. | $3 \times 4 =$ _____ | 23. | $4 \times 2 =$ _____ | 43. | $11 \times 4 =$ _____ |
| 4. | $4 \times 7 =$ _____ | 24. | $4 \times 4 =$ _____ | 44. | $4 \times 7 =$ _____ |
| 5. | $4 \times 4 =$ _____ | 25. | $4 \times 6 =$ _____ | 45. | $4 \times 1 =$ _____ |
| 6. | $7 \times 4 =$ _____ | 26. | $9 \times 4 =$ _____ | 46. | $4 \times 3 =$ _____ |
| 7. | $5 \times 4 =$ _____ | 27. | $4 \times 12 =$ _____ | 47. | $12 \times 4 =$ _____ |
| 8. | $4 \times 8 =$ _____ | 28. | $11 \times 4 =$ _____ | 48. | $9 \times 4 =$ _____ |
| 9. | $9 \times 4 =$ _____ | 29. | $4 \times 1 =$ _____ | 49. | $4 \times 6 =$ _____ |
| 10. | $4 \times 11 =$ _____ | 30. | $10 \times 4 =$ _____ | 50. | $3 \times 4 =$ _____ |
| 11. | $12 \times 4 =$ _____ | 31. | $4 \times 11 =$ _____ | 51. | $5 \times 4 =$ _____ |
| 12. | $4 \times 12 =$ _____ | 32. | $4 \times 5 =$ _____ | 52. | $10 \times 4 =$ _____ |
| 13. | $1 \times 4 =$ _____ | 33. | $4 \times 3 =$ _____ | 53. | $4 \times 5 =$ _____ |
| 14. | $4 \times 10 =$ _____ | 34. | $4 \times 2 =$ _____ | 54. | $8 \times 4 =$ _____ |
| 15. | $4 \times 7 =$ _____ | 35. | $7 \times 4 =$ _____ | 55. | $4 \times 2 =$ _____ |
| 16. | $6 \times 4 =$ _____ | 36. | $4 \times 4 =$ _____ | 56. | $4 \times 4 =$ _____ |
| 17. | $3 \times 4 =$ _____ | 37. | $4 \times 3 =$ _____ | 57. | $7 \times 4 =$ _____ |
| 18. | $1 \times 4 =$ _____ | 38. | $2 \times 4 =$ _____ | 58. | $9 \times 4 =$ _____ |
| 19. | $4 \times 4 =$ _____ | 39. | $9 \times 4 =$ _____ | 59. | $4 \times 8 =$ _____ |
| 20. | $8 \times 4 =$ _____ | 40. | $4 \times 8 =$ _____ | 60. | $6 \times 4 =$ _____ |



SCORE:



Grown-ups:
Can learners spot links between neighbouring questions?



Name: _____

MISSING NUMBERS 3

Practise 4s

Date: _____

1. _____ $\times 4 = 44$

21. _____ $\times 4 = 16$

41. _____ $\times 4 = 4$

2. _____ $\times 4 = 48$

22. _____ $\times 12 = 48$

42. _____ $\times 11 = 44$

3. _____ $\times 7 = 28$

23. _____ $\times 4 = 32$

43. _____ $\times 4 = 32$

4. _____ $\times 4 = 20$

24. _____ $\times 7 = 28$

44. _____ $\times 9 = 36$

5. _____ $\times 9 = 36$

25. _____ $\times 5 = 20$

45. _____ $\times 4 = 36$

6. _____ $\times 6 = 24$

26. _____ $\times 6 = 24$

46. _____ $\times 4 = 40$

7. _____ $\times 4 = 24$

27. _____ $\times 4 = 8$

47. _____ $\times 4 = 16$

8. _____ $\times 4 = 16$

28. _____ $\times 1 = 4$

48. _____ $\times 2 = 8$

9. _____ $\times 9 = 36$

29. _____ $\times 4 = 40$

49. _____ $\times 1 = 4$

10. _____ $\times 3 = 12$

30. _____ $\times 4 = 44$

50. _____ $\times 4 = 32$

11. _____ $\times 4 = 8$

31. _____ $\times 9 = 36$

51. _____ $\times 6 = 24$

12. _____ $\times 1 = 4$

32. _____ $\times 4 = 16$

52. _____ $\times 4 = 16$

13. _____ $\times 4 = 4$

33. _____ $\times 4 = 12$

53. _____ $\times 4 = 20$

14. _____ $\times 4 = 40$

34. _____ $\times 4 = 40$

54. _____ $\times 4 = 28$

15. _____ $\times 4 = 44$

35. _____ $\times 4 = 12$

55. _____ $\times 9 = 36$

16. _____ $\times 7 = 28$

36. _____ $\times 5 = 20$

56. _____ $\times 4 = 44$

17. _____ $\times 5 = 20$

37. _____ $\times 4 = 36$

57. _____ $\times 12 = 48$

18. _____ $\times 8 = 32$

38. _____ $\times 4 = 16$

58. _____ $\times 4 = 48$

19. _____ $\times 4 = 16$

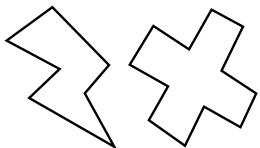
39. _____ $\times 4 = 4$

59. _____ $\times 4 = 12$

20. _____ $\times 4 = 28$

40. _____ $\times 6 = 24$

60. _____ $\times 7 = 28$



SCORE:

Grown-ups:
Can learners spot links between neighbouring questions?



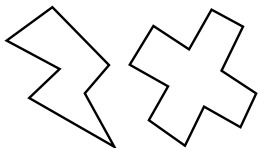
Name: _____

Date: _____

DIVISION 3

Practise 4s

- | | | | | | |
|-----|----------------------|-----|----------------------|-----|----------------------|
| 1. | $28 \div 7 =$ _____ | 21. | $48 \div 4 =$ _____ | 41. | $32 \div 4 =$ _____ |
| 2. | $28 \div 4 =$ _____ | 22. | $24 \div 4 =$ _____ | 42. | $36 \div 4 =$ _____ |
| 3. | $12 \div 3 =$ _____ | 23. | $36 \div 4 =$ _____ | 43. | $28 \div 7 =$ _____ |
| 4. | $8 \div 2 =$ _____ | 24. | $28 \div 7 =$ _____ | 44. | $44 \div 11 =$ _____ |
| 5. | $8 \div 4 =$ _____ | 25. | $12 \div 4 =$ _____ | 45. | $44 \div 4 =$ _____ |
| 6. | $16 \div 4 =$ _____ | 26. | $40 \div 4 =$ _____ | 46. | $4 \div 1 =$ _____ |
| 7. | $40 \div 4 =$ _____ | 27. | $20 \div 5 =$ _____ | 47. | $40 \div 4 =$ _____ |
| 8. | $44 \div 11 =$ _____ | 28. | $28 \div 4 =$ _____ | 48. | $36 \div 9 =$ _____ |
| 9. | $44 \div 4 =$ _____ | 29. | $16 \div 4 =$ _____ | 49. | $32 \div 8 =$ _____ |
| 10. | $28 \div 4 =$ _____ | 30. | $24 \div 4 =$ _____ | 50. | $16 \div 4 =$ _____ |
| 11. | $20 \div 5 =$ _____ | 31. | $16 \div 4 =$ _____ | 51. | $32 \div 4 =$ _____ |
| 12. | $48 \div 12 =$ _____ | 32. | $12 \div 3 =$ _____ | 52. | $24 \div 4 =$ _____ |
| 13. | $48 \div 4 =$ _____ | 33. | $36 \div 9 =$ _____ | 53. | $12 \div 4 =$ _____ |
| 14. | $32 \div 4 =$ _____ | 34. | $40 \div 4 =$ _____ | 54. | $28 \div 4 =$ _____ |
| 15. | $44 \div 4 =$ _____ | 35. | $44 \div 4 =$ _____ | 55. | $12 \div 3 =$ _____ |
| 16. | $20 \div 4 =$ _____ | 36. | $40 \div 4 =$ _____ | 56. | $48 \div 4 =$ _____ |
| 17. | $24 \div 6 =$ _____ | 37. | $48 \div 12 =$ _____ | 57. | $24 \div 4 =$ _____ |
| 18. | $12 \div 4 =$ _____ | 38. | $4 \div 1 =$ _____ | 58. | $20 \div 4 =$ _____ |
| 19. | $12 \div 3 =$ _____ | 39. | $4 \div 4 =$ _____ | 59. | $8 \div 2 =$ _____ |
| 20. | $36 \div 9 =$ _____ | 40. | $32 \div 8 =$ _____ | 60. | $8 \div 4 =$ _____ |



SCORE:

Grown-ups:
Can learners spot links between neighbouring questions?



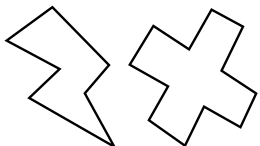
Name: _____

Date: _____

MULTIPLICATION 4

Practise 4s

- | | | | | | |
|-----|-----------------------|-----|-----------------------|-----|-----------------------|
| 1. | $12 \times 4 =$ _____ | 21. | $1 \times 4 =$ _____ | 41. | $4 \times 3 =$ _____ |
| 2. | $11 \times 4 =$ _____ | 22. | $4 \times 4 =$ _____ | 42. | $4 \times 2 =$ _____ |
| 3. | $4 \times 8 =$ _____ | 23. | $9 \times 4 =$ _____ | 43. | $8 \times 4 =$ _____ |
| 4. | $9 \times 4 =$ _____ | 24. | $4 \times 3 =$ _____ | 44. | $4 \times 4 =$ _____ |
| 5. | $4 \times 7 =$ _____ | 25. | $4 \times 6 =$ _____ | 45. | $4 \times 2 =$ _____ |
| 6. | $4 \times 5 =$ _____ | 26. | $9 \times 4 =$ _____ | 46. | $1 \times 4 =$ _____ |
| 7. | $6 \times 4 =$ _____ | 27. | $4 \times 8 =$ _____ | 47. | $11 \times 4 =$ _____ |
| 8. | $4 \times 4 =$ _____ | 28. | $4 \times 10 =$ _____ | 48. | $12 \times 4 =$ _____ |
| 9. | $3 \times 4 =$ _____ | 29. | $11 \times 4 =$ _____ | 49. | $4 \times 7 =$ _____ |
| 10. | $4 \times 3 =$ _____ | 30. | $4 \times 6 =$ _____ | 50. | $10 \times 4 =$ _____ |
| 11. | $6 \times 4 =$ _____ | 31. | $6 \times 4 =$ _____ | 51. | $4 \times 4 =$ _____ |
| 12. | $7 \times 4 =$ _____ | 32. | $9 \times 4 =$ _____ | 52. | $4 \times 9 =$ _____ |
| 13. | $10 \times 4 =$ _____ | 33. | $3 \times 4 =$ _____ | 53. | $6 \times 4 =$ _____ |
| 14. | $4 \times 12 =$ _____ | 34. | $5 \times 4 =$ _____ | 54. | $4 \times 8 =$ _____ |
| 15. | $11 \times 4 =$ _____ | 35. | $4 \times 8 =$ _____ | 55. | $4 \times 4 =$ _____ |
| 16. | $6 \times 4 =$ _____ | 36. | $4 \times 11 =$ _____ | 56. | $11 \times 4 =$ _____ |
| 17. | $4 \times 8 =$ _____ | 37. | $4 \times 10 =$ _____ | 57. | $4 \times 3 =$ _____ |
| 18. | $4 \times 3 =$ _____ | 38. | $1 \times 4 =$ _____ | 58. | $4 \times 10 =$ _____ |
| 19. | $2 \times 4 =$ _____ | 39. | $2 \times 4 =$ _____ | 59. | $4 \times 6 =$ _____ |
| 20. | $4 \times 1 =$ _____ | 40. | $4 \times 5 =$ _____ | 60. | $9 \times 4 =$ _____ |



SCORE:

Grown-ups:
Can learners spot links between neighbouring questions?



Name: _____

MISSING NUMBERS 4

Practise 4s

Date: _____

1. _____ \times 4 = 24

21. _____ \times 4 = 20

41. _____ \times 4 = 24

2. _____ \times 9 = 36

22. _____ \times 4 = 16

42. _____ \times 5 = 20

3. _____ \times 8 = 32

23. _____ \times 3 = 12

43. _____ \times 4 = 40

4. _____ \times 4 = 16

24. _____ \times 6 = 24

44. _____ \times 4 = 4

5. _____ \times 4 = 12

25. _____ \times 4 = 28

45. _____ \times 9 = 36

6. _____ \times 4 = 20

26. _____ \times 4 = 20

46. _____ \times 4 = 44

7. _____ \times 6 = 24

27. _____ \times 4 = 36

47. _____ \times 7 = 28

8. _____ \times 4 = 4

28. _____ \times 8 = 32

48. _____ \times 3 = 12

9. _____ \times 4 = 8

29. _____ \times 4 = 4

49. _____ \times 2 = 8

10. _____ \times 4 = 40

30. _____ \times 12 = 48

50. _____ \times 4 = 16

11. _____ \times 12 = 48

31. _____ \times 4 = 12

51. _____ \times 5 = 20

12. _____ \times 4 = 24

32. _____ \times 2 = 8

52. _____ \times 4 = 24

13. _____ \times 4 = 28

33. _____ \times 6 = 24

53. _____ \times 4 = 40

14. _____ \times 1 = 4

34. _____ \times 4 = 8

54. _____ \times 12 = 48

15. _____ \times 4 = 8

35. _____ \times 4 = 4

55. _____ \times 1 = 4

16. _____ \times 4 = 44

36. _____ \times 12 = 48

56. _____ \times 4 = 40

17. _____ \times 9 = 36

37. _____ \times 9 = 36

57. _____ \times 9 = 36

18. _____ \times 4 = 40

38. _____ \times 4 = 16

58. _____ \times 4 = 16

19. _____ \times 6 = 24

39. _____ \times 4 = 12

59. _____ \times 4 = 28

20. _____ \times 4 = 28

40. _____ \times 8 = 32

60. _____ \times 7 = 28



SCORE:

Grown-ups:
Can learners spot links between neighbouring questions?



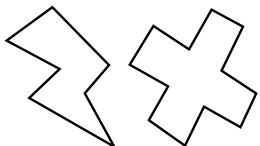
Name: _____

Date: _____

DIVISION 4

Practise 4s

- | | | | | | |
|-----|----------------------|-----|----------------------|-----|----------------------|
| 1. | $48 \div 4 =$ _____ | 21. | $40 \div 4 =$ _____ | 41. | $48 \div 4 =$ _____ |
| 2. | $44 \div 4 =$ _____ | 22. | $48 \div 4 =$ _____ | 42. | $4 \div 1 =$ _____ |
| 3. | $4 \div 1 =$ _____ | 23. | $44 \div 11 =$ _____ | 43. | $4 \div 4 =$ _____ |
| 4. | $4 \div 4 =$ _____ | 24. | $28 \div 4 =$ _____ | 44. | $16 \div 4 =$ _____ |
| 5. | $36 \div 9 =$ _____ | 25. | $28 \div 7 =$ _____ | 45. | $28 \div 7 =$ _____ |
| 6. | $32 \div 4 =$ _____ | 26. | $16 \div 4 =$ _____ | 46. | $28 \div 4 =$ _____ |
| 7. | $20 \div 4 =$ _____ | 27. | $20 \div 4 =$ _____ | 47. | $36 \div 9 =$ _____ |
| 8. | $24 \div 6 =$ _____ | 28. | $36 \div 4 =$ _____ | 48. | $40 \div 4 =$ _____ |
| 9. | $28 \div 7 =$ _____ | 29. | $36 \div 9 =$ _____ | 49. | $44 \div 4 =$ _____ |
| 10. | $40 \div 4 =$ _____ | 30. | $32 \div 4 =$ _____ | 50. | $8 \div 4 =$ _____ |
| 11. | $12 \div 3 =$ _____ | 31. | $24 \div 4 =$ _____ | 51. | $44 \div 11 =$ _____ |
| 12. | $8 \div 2 =$ _____ | 32. | $16 \div 4 =$ _____ | 52. | $12 \div 4 =$ _____ |
| 13. | $20 \div 4 =$ _____ | 33. | $4 \div 4 =$ _____ | 53. | $48 \div 12 =$ _____ |
| 14. | $24 \div 4 =$ _____ | 34. | $20 \div 5 =$ _____ | 54. | $16 \div 4 =$ _____ |
| 15. | $36 \div 4 =$ _____ | 35. | $28 \div 7 =$ _____ | 55. | $28 \div 4 =$ _____ |
| 16. | $16 \div 4 =$ _____ | 36. | $8 \div 4 =$ _____ | 56. | $24 \div 6 =$ _____ |
| 17. | $24 \div 4 =$ _____ | 37. | $36 \div 9 =$ _____ | 57. | $4 \div 4 =$ _____ |
| 18. | $32 \div 8 =$ _____ | 38. | $12 \div 4 =$ _____ | 58. | $8 \div 2 =$ _____ |
| 19. | $4 \div 4 =$ _____ | 39. | $44 \div 11 =$ _____ | 59. | $40 \div 4 =$ _____ |
| 20. | $48 \div 12 =$ _____ | 40. | $24 \div 6 =$ _____ | 60. | $4 \div 1 =$ _____ |



SCORE:

Grown-ups:
Can learners spot links between neighbouring questions?





CHECK 2



Name: _____

Date: _____

- | | | | | | |
|-----|-----------------------|-----|-----------------------|-----|---------------------|
| 1. | $9 \times 4 =$ _____ | 21. | $3 \times 4 =$ _____ | 41. | $4 \div 4 =$ _____ |
| 2. | $4 \times 4 =$ _____ | 22. | $10 \times 4 =$ _____ | 42. | $36 \div 4 =$ _____ |
| 3. | $12 \times 4 =$ _____ | 23. | $2 \times 4 =$ _____ | 43. | $28 \div 4 =$ _____ |
| 4. | $3 \times 4 =$ _____ | 24. | $4 \times 4 =$ _____ | 44. | $44 \div 4 =$ _____ |
| 5. | $6 \times 4 =$ _____ | 25. | $8 \times 4 =$ _____ | 45. | $8 \div 4 =$ _____ |
| 6. | $10 \times 4 =$ _____ | 26. | $6 \times 4 =$ _____ | 46. | $40 \div 4 =$ _____ |
| 7. | $12 \times 4 =$ _____ | 27. | $12 \times 4 =$ _____ | 47. | $48 \div 4 =$ _____ |
| 8. | $2 \times 4 =$ _____ | 28. | $5 \times 4 =$ _____ | 48. | $4 \div 4 =$ _____ |
| 9. | $1 \times 4 =$ _____ | 29. | $1 \times 4 =$ _____ | 49. | $12 \div 4 =$ _____ |
| 10. | $8 \times 4 =$ _____ | 30. | $7 \times 4 =$ _____ | 50. | $32 \div 4 =$ _____ |
| 11. | $4 \times 4 =$ _____ | 31. | $36 \div 4 =$ _____ | 51. | $16 \div 4 =$ _____ |
| 12. | $5 \times 4 =$ _____ | 32. | $20 \div 4 =$ _____ | 52. | $28 \div 4 =$ _____ |
| 13. | $7 \times 4 =$ _____ | 33. | $16 \div 4 =$ _____ | 53. | $12 \div 4 =$ _____ |
| 14. | $6 \times 4 =$ _____ | 34. | $40 \div 4 =$ _____ | 54. | $44 \div 4 =$ _____ |
| 15. | $10 \times 4 =$ _____ | 35. | $44 \div 4 =$ _____ | 55. | $40 \div 4 =$ _____ |
| 16. | $12 \times 4 =$ _____ | 36. | $12 \div 4 =$ _____ | 56. | $20 \div 4 =$ _____ |
| 17. | $1 \times 4 =$ _____ | 37. | $24 \div 4 =$ _____ | 57. | $8 \div 4 =$ _____ |
| 18. | $11 \times 4 =$ _____ | 38. | $28 \div 4 =$ _____ | 58. | $28 \div 4 =$ _____ |
| 19. | $9 \times 4 =$ _____ | 39. | $20 \div 4 =$ _____ | 59. | $24 \div 4 =$ _____ |
| 20. | $7 \times 4 =$ _____ | 40. | $32 \div 4 =$ _____ | 60. | $4 \div 4 =$ _____ |

SCORE:
(5 minute limit)

/60

TIME TAKEN (optional)

<input type="text"/>	<input type="text"/>
MINUTES	SECONDS

