


NAME: _____

23



VIBE

SCORE

BASELINE

CHECK 1

CHECK 2



BASELINE



Name: _____

Date: _____

- | | | | | | |
|-----|-----------------------|-----|-----------------------|-----|---------------------|
| 1. | $5 \times 2 =$ _____ | 21. | $8 \times 2 =$ _____ | 41. | $20 \div 2 =$ _____ |
| 2. | $7 \times 2 =$ _____ | 22. | $5 \times 2 =$ _____ | 42. | $22 \div 2 =$ _____ |
| 3. | $8 \times 2 =$ _____ | 23. | $3 \times 2 =$ _____ | 43. | $16 \div 2 =$ _____ |
| 4. | $4 \times 2 =$ _____ | 24. | $4 \times 2 =$ _____ | 44. | $10 \div 2 =$ _____ |
| 5. | $3 \times 2 =$ _____ | 25. | $6 \times 2 =$ _____ | 45. | $14 \div 2 =$ _____ |
| 6. | $9 \times 2 =$ _____ | 26. | $9 \times 2 =$ _____ | 46. | $12 \div 2 =$ _____ |
| 7. | $11 \times 2 =$ _____ | 27. | $10 \times 2 =$ _____ | 47. | $4 \div 2 =$ _____ |
| 8. | $12 \times 2 =$ _____ | 28. | $7 \times 2 =$ _____ | 48. | $2 \div 2 =$ _____ |
| 9. | $3 \times 2 =$ _____ | 29. | $2 \times 2 =$ _____ | 49. | $18 \div 2 =$ _____ |
| 10. | $1 \times 2 =$ _____ | 30. | $1 \times 2 =$ _____ | 50. | $22 \div 2 =$ _____ |
| 11. | $8 \times 2 =$ _____ | 31. | $4 \div 2 =$ _____ | 51. | $14 \div 2 =$ _____ |
| 12. | $6 \times 2 =$ _____ | 32. | $8 \div 2 =$ _____ | 52. | $8 \div 2 =$ _____ |
| 13. | $7 \times 2 =$ _____ | 33. | $10 \div 2 =$ _____ | 53. | $6 \div 2 =$ _____ |
| 14. | $9 \times 2 =$ _____ | 34. | $18 \div 2 =$ _____ | 54. | $16 \div 2 =$ _____ |
| 15. | $12 \times 2 =$ _____ | 35. | $20 \div 2 =$ _____ | 55. | $10 \div 2 =$ _____ |
| 16. | $11 \times 2 =$ _____ | 36. | $24 \div 2 =$ _____ | 56. | $24 \div 2 =$ _____ |
| 17. | $2 \times 2 =$ _____ | 37. | $14 \div 2 =$ _____ | 57. | $20 \div 2 =$ _____ |
| 18. | $1 \times 2 =$ _____ | 38. | $12 \div 2 =$ _____ | 58. | $12 \div 2 =$ _____ |
| 19. | $10 \times 2 =$ _____ | 39. | $6 \div 2 =$ _____ | 59. | $2 \div 2 =$ _____ |
| 20. | $9 \times 2 =$ _____ | 40. | $2 \div 2 =$ _____ | 60. | $4 \div 2 =$ _____ |

SCORE:
(5 minute limit)

/60

TIME TAKEN (optional)

<input type="text"/>	<input type="text"/>
MINUTES	SECONDS



Name: _____

Date: _____

MULTIPLICATION 1

Practise 2s

Complete first and then use it to help you if you get stuck.

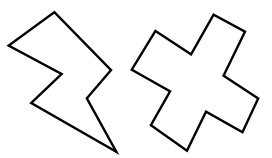
ROCK BOX

1.	$1 \times 2 =$	_____
2.	$2 \times 2 =$	_____
3.	$3 \times 2 =$	_____
4.	$4 \times 2 =$	_____
5.	$5 \times 2 =$	_____
6.	$6 \times 2 =$	_____
7.	$7 \times 2 =$	_____
8.	$8 \times 2 =$	_____
9.	$9 \times 2 =$	_____
10.	$10 \times 2 =$	_____
11.	$11 \times 2 =$	_____
12.	$12 \times 2 =$	_____


- | | | | | | |
|-----|-----------------|-------|-----|-----------------|-------|
| 21. | $11 \times 2 =$ | _____ | 41. | $9 \times 2 =$ | _____ |
| 22. | $4 \times 2 =$ | _____ | 42. | $5 \times 2 =$ | _____ |
| 23. | $10 \times 2 =$ | _____ | 43. | $3 \times 2 =$ | _____ |
| 24. | $8 \times 2 =$ | _____ | 44. | $2 \times 2 =$ | _____ |
| 25. | $9 \times 2 =$ | _____ | 45. | $12 \times 2 =$ | _____ |
| 26. | $1 \times 2 =$ | _____ | 46. | $10 \times 2 =$ | _____ |
| 27. | $3 \times 2 =$ | _____ | 47. | $11 \times 2 =$ | _____ |
| 28. | $12 \times 2 =$ | _____ | 48. | $1 \times 2 =$ | _____ |
| 29. | $4 \times 2 =$ | _____ | 49. | $5 \times 2 =$ | _____ |
| 30. | $9 \times 2 =$ | _____ | 50. | $7 \times 2 =$ | _____ |
| 31. | $8 \times 2 =$ | _____ | 51. | $8 \times 2 =$ | _____ |
| 32. | $7 \times 2 =$ | _____ | 52. | $11 \times 2 =$ | _____ |
| 33. | $11 \times 2 =$ | _____ | 53. | $10 \times 2 =$ | _____ |
| 34. | $7 \times 2 =$ | _____ | 54. | $6 \times 2 =$ | _____ |
| 35. | $1 \times 2 =$ | _____ | 55. | $9 \times 2 =$ | _____ |
| 36. | $12 \times 2 =$ | _____ | 56. | $4 \times 2 =$ | _____ |
| 37. | $2 \times 2 =$ | _____ | 57. | $3 \times 2 =$ | _____ |
| 38. | $5 \times 2 =$ | _____ | 58. | $6 \times 2 =$ | _____ |
| 39. | $4 \times 2 =$ | _____ | 59. | $9 \times 2 =$ | _____ |
| 40. | $6 \times 2 =$ | _____ | 60. | $11 \times 2 =$ | _____ |

Continue here...

- | | | |
|-----|-----------------|-------|
| 13. | $7 \times 2 =$ | _____ |
| 14. | $12 \times 2 =$ | _____ |
| 15. | $8 \times 2 =$ | _____ |
| 16. | $12 \times 2 =$ | _____ |
| 17. | $10 \times 2 =$ | _____ |
| 18. | $9 \times 2 =$ | _____ |
| 19. | $11 \times 2 =$ | _____ |
| 20. | $3 \times 2 =$ | _____ |



SCORE: _____



Grown-ups:
Can learners spot links between neighbouring questions?



Name: _____

Date: _____

MULTIPLICATION 2

Practise 2s

Complete first and then use it to help you if you get stuck.

ROCK BOX

1. $1 \times 2 =$ _____

2. $2 \times 2 =$ _____

3. $3 \times 2 =$ _____

4. $4 \times 2 =$ _____

5. $5 \times 2 =$ _____

6. $6 \times 2 =$ _____

7. $7 \times 2 =$ _____

8. $8 \times 2 =$ _____

9. $9 \times 2 =$ _____

10. $10 \times 2 =$ _____

11. $11 \times 2 =$ _____

12. $12 \times 2 =$ _____

13. $2 \times 1 =$ _____

14. $2 \times 2 =$ _____

15. $2 \times 3 =$ _____

16. $2 \times 4 =$ _____

17. $2 \times 5 =$ _____

18. $2 \times 6 =$ _____

19. $2 \times 7 =$ _____

20. $2 \times 8 =$ _____

21. $2 \times 9 =$ _____

22. $2 \times 10 =$ _____

23. $2 \times 11 =$ _____

24. $2 \times 12 =$ _____

41. $2 \times 3 =$ _____

42. $5 \times 2 =$ _____

43. $2 \times 8 =$ _____

44. $7 \times 2 =$ _____

45. $8 \times 2 =$ _____

46. $2 \times 12 =$ _____

47. $4 \times 2 =$ _____

48. $2 \times 2 =$ _____

49. $1 \times 2 =$ _____

50. $2 \times 5 =$ _____

51. $2 \times 11 =$ _____

52. $2 \times 1 =$ _____

53. $2 \times 12 =$ _____

54. $2 \times 7 =$ _____

55. $2 \times 9 =$ _____

56. $2 \times 6 =$ _____

57. $2 \times 5 =$ _____

58. $2 \times 10 =$ _____

59. $2 \times 3 =$ _____

60. $3 \times 2 =$ _____

Continue here...

25. $2 \times 4 =$ _____

26. $1 \times 2 =$ _____

27. $2 \times 5 =$ _____

28. $6 \times 2 =$ _____

29. $2 \times 6 =$ _____

30. $5 \times 2 =$ _____

31. $2 \times 2 =$ _____

32. $4 \times 2 =$ _____

33. $2 \times 7 =$ _____

34. $2 \times 8 =$ _____

35. $9 \times 2 =$ _____

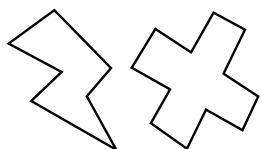
36. $2 \times 11 =$ _____

37. $12 \times 2 =$ _____

38. $11 \times 2 =$ _____

39. $2 \times 2 =$ _____

40. $2 \times 1 =$ _____



SCORE:

Grown-ups:
Can learners spot links between neighbouring questions?



Name: _____

Date: _____

MISSING NUMBER 1

Practise 2s

Complete first and then use it to help you if you get stuck.

ROCK BOX

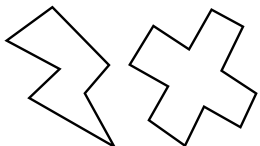
1.	_____	$\times 2 = 2$
2.	_____	$\times 2 = 4$
3.	_____	$\times 2 = 6$
4.	_____	$\times 2 = 8$
5.	_____	$\times 2 = 10$
6.	_____	$\times 2 = 12$
7.	_____	$\times 2 = 14$
8.	_____	$\times 2 = 16$
9.	_____	$\times 2 = 18$
10.	_____	$\times 2 = 20$
11.	_____	$\times 2 = 22$
12.	_____	$\times 2 = 24$

- 21. _____ $\times 2 = 10$
- 22. _____ $\times 2 = 4$
- 23. _____ $\times 2 = 12$
- 24. _____ $\times 2 = 24$
- 25. _____ $\times 2 = 20$
- 26. _____ $\times 2 = 18$
- 27. _____ $\times 2 = 22$
- 28. _____ $\times 2 = 14$
- 29. _____ $\times 2 = 8$
- 30. _____ $\times 2 = 6$
- 31. _____ $\times 2 = 2$
- 32. _____ $\times 2 = 22$
- 33. _____ $\times 2 = 16$
- 34. _____ $\times 2 = 10$
- 35. _____ $\times 2 = 2$
- 36. _____ $\times 2 = 8$
- 37. _____ $\times 2 = 12$
- 38. _____ $\times 2 = 14$
- 39. _____ $\times 2 = 18$
- 40. _____ $\times 2 = 24$

- 41. _____ $\times 2 = 4$
- 42. _____ $\times 2 = 6$
- 42. _____ $\times 2 = 2$
- 44. _____ $\times 2 = 10$
- 45. _____ $\times 2 = 14$
- 46. _____ $\times 2 = 8$
- 47. _____ $\times 2 = 16$
- 48. _____ $\times 2 = 24$
- 49. _____ $\times 2 = 20$
- 50. _____ $\times 2 = 18$
- 51. _____ $\times 2 = 12$
- 52. _____ $\times 2 = 6$
- 53. _____ $\times 2 = 22$
- 54. _____ $\times 2 = 2$
- 55. _____ $\times 2 = 4$
- 56. _____ $\times 2 = 14$
- 57. _____ $\times 2 = 10$
- 58. _____ $\times 2 = 16$
- 59. _____ $\times 2 = 18$
- 60. _____ $\times 2 = 20$

Continue here...

- 13. _____ $\times 2 = 8$
- 14. _____ $\times 2 = 2$
- 15. _____ $\times 2 = 20$
- 16. _____ $\times 2 = 18$
- 17. _____ $\times 2 = 24$
- 18. _____ $\times 2 = 22$
- 19. _____ $\times 2 = 16$
- 20. _____ $\times 2 = 14$



SCORE: _____



Grown-ups:
Can learners spot links between neighbouring questions?



Name: _____

Date: _____

MISSING NUMBER 2

Practise 2s

Complete first and then use it to help you if you get stuck.

ROCK BOX			
1.	$\times 2 = 2$	2.	$\times 1 = 2$
3.	$\times 2 = 4$	4.	$\times 2 = 4$
5.	$\times 2 = 6$	6.	$\times 3 = 6$
7.	$\times 2 = 8$	8.	$\times 4 = 8$
9.	$\times 2 = 10$	10.	$\times 5 = 10$
11.	$\times 2 = 12$	12.	$\times 6 = 12$
13.	$\times 2 = 14$	14.	$\times 7 = 14$
15.	$\times 2 = 16$	16.	$\times 8 = 16$
17.	$\times 2 = 18$	18.	$\times 9 = 18$
19.	$\times 2 = 20$	20.	$\times 10 = 20$
21.	$\times 2 = 22$	22.	$\times 11 = 22$
23.	$\times 2 = 24$	24.	$\times 12 = 24$

Continue here...

25. _____ $\times 2 = 18$

33. _____ $\times 1 = 2$

26. _____ $\times 9 = 18$

34. _____ $\times 11 = 22$

27. _____ $\times 2 = 12$

35. _____ $\times 9 = 18$

28. _____ $\times 7 = 14$

36. _____ $\times 2 = 24$

29. _____ $\times 8 = 16$

37. _____ $\times 2 = 14$

30. _____ $\times 2 = 22$

38. _____ $\times 5 = 10$

31. _____ $\times 12 = 24$

39. _____ $\times 2 = 12$

32. _____ $\times 2 = 2$

40. _____ $\times 3 = 6$

41. _____ $\times 4 = 8$

42. _____ $\times 2 = 4$

43. _____ $\times 2 = 16$

44. _____ $\times 12 = 24$

45. _____ $\times 6 = 12$

46. _____ $\times 7 = 14$

47. _____ $\times 2 = 18$

48. _____ $\times 11 = 22$

49. _____ $\times 2 = 20$

50. _____ $\times 2 = 2$

51. _____ $\times 2 = 24$

52. _____ $\times 2 = 6$

53. _____ $\times 2 = 8$

54. _____ $\times 2 = 10$

55. _____ $\times 2 = 20$


56. _____ $\times 2 = 4$

57. _____ $\times 8 = 16$

58. _____ $\times 1 = 2$

59. _____ $\times 9 = 18$

60. _____ $\times 12 = 24$



SCORE:

Grown-ups:
Can learners spot links between neighbouring questions?



Name: _____

Date: _____

DIVISION 1

Practise 2s

Complete first and then use it to help you if you get stuck.

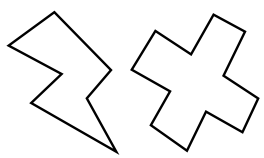
ROCK BOX

1.	$2 \div 2 =$	_____
2.	$4 \div 2 =$	_____
3.	$6 \div 2 =$	_____
4.	$8 \div 2 =$	_____
5.	$10 \div 2 =$	_____
6.	$12 \div 2 =$	_____
7.	$14 \div 2 =$	_____
8.	$16 \div 2 =$	_____
9.	$18 \div 2 =$	_____
10.	$20 \div 2 =$	_____
11.	$22 \div 2 =$	_____
12.	$24 \div 2 =$	_____

- | | | | | | |
|-----|---------------|-------|-----|---------------|-------|
| 21. | $22 \div 2 =$ | _____ | 41. | $18 \div 2 =$ | _____ |
| 22. | $18 \div 2 =$ | _____ | 42. | $16 \div 2 =$ | _____ |
| 23. | $10 \div 2 =$ | _____ | 43. | $4 \div 2 =$ | _____ |
| 24. | $8 \div 2 =$ | _____ | 44. | $12 \div 2 =$ | _____ |
| 25. | $6 \div 2 =$ | _____ | 45. | $14 \div 2 =$ | _____ |
| 26. | $12 \div 2 =$ | _____ | 46. | $12 \div 2 =$ | _____ |
| 27. | $24 \div 2 =$ | _____ | 47. | $10 \div 2 =$ | _____ |
| 28. | $16 \div 2 =$ | _____ | 48. | $16 \div 2 =$ | _____ |
| 29. | $8 \div 2 =$ | _____ | 49. | $4 \div 2 =$ | _____ |
| 30. | $20 \div 2 =$ | _____ | 50. | $2 \div 2 =$ | _____ |
| 31. | $22 \div 2 =$ | _____ | 51. | $8 \div 2 =$ | _____ |
| 32. | $18 \div 2 =$ | _____ | 52. | $18 \div 2 =$ | _____ |
| 33. | $14 \div 2 =$ | _____ | 53. | $6 \div 2 =$ | _____ |
| 34. | $2 \div 2 =$ | _____ | 54. | $16 \div 2 =$ | _____ |
| 35. | $10 \div 2 =$ | _____ | 55. | $22 \div 2 =$ | _____ |
| 36. | $16 \div 2 =$ | _____ | 56. | $20 \div 2 =$ | _____ |
| 37. | $24 \div 2 =$ | _____ | 57. | $24 \div 2 =$ | _____ |
| 38. | $6 \div 2 =$ | _____ | 58. | $14 \div 2 =$ | _____ |
| 39. | $2 \div 2 =$ | _____ | 59. | $10 \div 2 =$ | _____ |
| 40. | $12 \div 2 =$ | _____ | 60. | $12 \div 2 =$ | _____ |

Continue here...

- | | | |
|-----|---------------|-------|
| 13. | $24 \div 2 =$ | _____ |
| 14. | $16 \div 2 =$ | _____ |
| 15. | $20 \div 2 =$ | _____ |
| 16. | $12 \div 2 =$ | _____ |
| 17. | $22 \div 2 =$ | _____ |
| 18. | $2 \div 2 =$ | _____ |
| 19. | $6 \div 2 =$ | _____ |
| 20. | $14 \div 2 =$ | _____ |



SCORE:

Grown-ups:
Can learners spot links between neighbouring questions?



Name: _____

Date: _____

DIVISION 2

Practise 2s

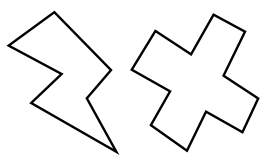
Complete first and then use it to help you if you get stuck.

ROCK BOX			
1.	$2 \div 2 =$	2.	$2 \div 1 =$
3.	$4 \div 2 =$	4.	$4 \div 2 =$
5.	$6 \div 2 =$	6.	$6 \div 3 =$
7.	$8 \div 2 =$	8.	$8 \div 4 =$
9.	$10 \div 2 =$	10.	$10 \div 5 =$
11.	$12 \div 2 =$	12.	$12 \div 6 =$
13.	$14 \div 2 =$	14.	$14 \div 7 =$
15.	$16 \div 2 =$	16.	$16 \div 8 =$
17.	$18 \div 2 =$	18.	$18 \div 9 =$
19.	$20 \div 2 =$	20.	$20 \div 10 =$
21.	$22 \div 2 =$	22.	$22 \div 11 =$
23.	$24 \div 2 =$	24.	$24 \div 12 =$

Continue here...

25.	$10 \div 5 =$ _____	33.	$12 \div 6 =$ _____
26.	$6 \div 2 =$ _____	34.	$10 \div 2 =$ _____
27.	$10 \div 2 =$ _____	35.	$12 \div 2 =$ _____
28.	$20 \div 2 =$ _____	36.	$18 \div 9 =$ _____
29.	$6 \div 3 =$ _____	37.	$22 \div 11 =$ _____
30.	$2 \div 2 =$ _____	38.	$18 \div 2 =$ _____
31.	$2 \div 1 =$ _____	39.	$8 \div 2 =$ _____
32.	$4 \div 2 =$ _____	40.	$14 \div 7 =$ _____

41.	$16 \div 8 =$ _____
42.	$12 \div 6 =$ _____
43.	$10 \div 2 =$ _____
44.	$24 \div 12 =$ _____
45.	$20 \div 2 =$ _____
46.	$6 \div 2 =$ _____
47.	$14 \div 2 =$ _____
48.	$2 \div 1 =$ _____
49.	$22 \div 2 =$ _____
50.	$8 \div 4 =$ _____
51.	$8 \div 2 =$ _____
52.	$16 \div 2 =$ _____
53.	$18 \div 9 =$ _____
54.	$16 \div 8 =$ _____
55.	$20 \div 2 =$ _____
56.	$12 \div 2 =$ _____
57.	$4 \div 2 =$ _____
58.	$6 \div 3 =$ _____
59.	$14 \div 2 =$ _____
60.	$10 \div 5 =$ _____



SCORE:

Grown-ups:
Can learners spot links between neighbouring questions?





CHECK 1



Name: _____

Date: _____

- | | | | | | |
|-----|-----------------------|-----|-----------------------|-----|---------------------|
| 1. | $8 \times 2 =$ _____ | 21. | $8 \times 2 =$ _____ | 41. | $4 \div 2 =$ _____ |
| 2. | $2 \times 2 =$ _____ | 22. | $10 \times 2 =$ _____ | 42. | $20 \div 2 =$ _____ |
| 3. | $5 \times 2 =$ _____ | 23. | $12 \times 2 =$ _____ | 43. | $16 \div 2 =$ _____ |
| 4. | $4 \times 2 =$ _____ | 24. | $9 \times 2 =$ _____ | 44. | $2 \div 2 =$ _____ |
| 5. | $3 \times 2 =$ _____ | 25. | $2 \times 2 =$ _____ | 45. | $10 \div 2 =$ _____ |
| 6. | $6 \times 2 =$ _____ | 26. | $1 \times 2 =$ _____ | 46. | $18 \div 2 =$ _____ |
| 7. | $7 \times 2 =$ _____ | 27. | $5 \times 2 =$ _____ | 47. | $14 \div 2 =$ _____ |
| 8. | $10 \times 2 =$ _____ | 28. | $4 \times 2 =$ _____ | 48. | $2 \div 2 =$ _____ |
| 9. | $12 \times 2 =$ _____ | 29. | $3 \times 2 =$ _____ | 49. | $20 \div 2 =$ _____ |
| 10. | $1 \times 2 =$ _____ | 30. | $6 \times 2 =$ _____ | 50. | $24 \div 2 =$ _____ |
| 11. | $9 \times 2 =$ _____ | 31. | $6 \div 2 =$ _____ | 51. | $8 \div 2 =$ _____ |
| 12. | $2 \times 2 =$ _____ | 32. | $12 \div 2 =$ _____ | 52. | $12 \div 2 =$ _____ |
| 13. | $11 \times 2 =$ _____ | 33. | $18 \div 2 =$ _____ | 53. | $10 \div 2 =$ _____ |
| 14. | $7 \times 2 =$ _____ | 34. | $10 \div 2 =$ _____ | 54. | $6 \div 2 =$ _____ |
| 15. | $9 \times 2 =$ _____ | 35. | $20 \div 2 =$ _____ | 55. | $20 \div 2 =$ _____ |
| 16. | $4 \times 2 =$ _____ | 36. | $2 \div 2 =$ _____ | 56. | $22 \div 2 =$ _____ |
| 17. | $3 \times 2 =$ _____ | 37. | $22 \div 2 =$ _____ | 57. | $18 \div 2 =$ _____ |
| 18. | $6 \times 2 =$ _____ | 38. | $24 \div 2 =$ _____ | 58. | $2 \div 2 =$ _____ |
| 19. | $1 \times 2 =$ _____ | 39. | $16 \div 2 =$ _____ | 59. | $4 \div 2 =$ _____ |
| 20. | $5 \times 2 =$ _____ | 40. | $18 \div 2 =$ _____ | 60. | $8 \div 2 =$ _____ |

SCORE:
(5 minute limit)

/60

TIME TAKEN (optional)

<input type="text"/>	<input type="text"/>
MINUTES	SECONDS



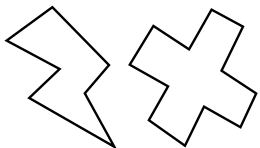
Name: _____

Date: _____


MULTIPLICATION 3

Practise 2s

- | | | | | | |
|-----|-----------------------|-----|-----------------------|-----|-----------------------|
| 1. | $2 \times 5 =$ _____ | 21. | $2 \times 8 =$ _____ | 41. | $1 \times 2 =$ _____ |
| 2. | $2 \times 3 =$ _____ | 22. | $2 \times 1 =$ _____ | 42. | $2 \times 12 =$ _____ |
| 3. | $3 \times 2 =$ _____ | 23. | $2 \times 2 =$ _____ | 43. | $11 \times 2 =$ _____ |
| 4. | $2 \times 7 =$ _____ | 24. | $4 \times 2 =$ _____ | 44. | $2 \times 7 =$ _____ |
| 5. | $2 \times 4 =$ _____ | 25. | $2 \times 6 =$ _____ | 45. | $2 \times 1 =$ _____ |
| 6. | $7 \times 2 =$ _____ | 26. | $9 \times 2 =$ _____ | 46. | $2 \times 3 =$ _____ |
| 7. | $5 \times 2 =$ _____ | 27. | $2 \times 12 =$ _____ | 47. | $12 \times 2 =$ _____ |
| 8. | $2 \times 8 =$ _____ | 28. | $11 \times 2 =$ _____ | 48. | $9 \times 2 =$ _____ |
| 9. | $9 \times 2 =$ _____ | 29. | $2 \times 1 =$ _____ | 49. | $2 \times 6 =$ _____ |
| 10. | $2 \times 11 =$ _____ | 30. | $10 \times 2 =$ _____ | 50. | $3 \times 2 =$ _____ |
| 11. | $12 \times 2 =$ _____ | 31. | $2 \times 11 =$ _____ | 51. | $5 \times 2 =$ _____ |
| 12. | $2 \times 12 =$ _____ | 32. | $2 \times 5 =$ _____ | 52. | $10 \times 2 =$ _____ |
| 13. | $1 \times 2 =$ _____ | 33. | $2 \times 3 =$ _____ | 53. | $2 \times 5 =$ _____ |
| 14. | $2 \times 10 =$ _____ | 34. | $10 \times 2 =$ _____ | 54. | $8 \times 2 =$ _____ |
| 15. | $2 \times 7 =$ _____ | 35. | $7 \times 2 =$ _____ | 55. | $2 \times 2 =$ _____ |
| 16. | $6 \times 2 =$ _____ | 36. | $2 \times 4 =$ _____ | 56. | $2 \times 4 =$ _____ |
| 17. | $3 \times 2 =$ _____ | 37. | $2 \times 3 =$ _____ | 57. | $7 \times 2 =$ _____ |
| 18. | $1 \times 2 =$ _____ | 38. | $2 \times 2 =$ _____ | 58. | $9 \times 2 =$ _____ |
| 19. | $4 \times 2 =$ _____ | 39. | $9 \times 2 =$ _____ | 59. | $2 \times 8 =$ _____ |
| 20. | $8 \times 2 =$ _____ | 40. | $2 \times 8 =$ _____ | 60. | $6 \times 2 =$ _____ |



SCORE:



Grown-ups:
Can learners spot links between neighbouring questions?



Name: _____

MISSING NUMBERS 3

Practise 2s

Date: _____

1. _____ $\times 2 = 22$

21. _____ $\times 2 = 8$

41. _____ $\times 2 = 2$

2. _____ $\times 2 = 24$

22. _____ $\times 12 = 24$

42. _____ $\times 11 = 22$

3. _____ $\times 7 = 14$

23. _____ $\times 2 = 16$

43. _____ $\times 2 = 16$

4. _____ $\times 2 = 10$

24. _____ $\times 7 = 14$

44. _____ $\times 9 = 18$

5. _____ $\times 9 = 18$

25. _____ $\times 5 = 10$

45. _____ $\times 2 = 18$

6. _____ $\times 6 = 12$

26. _____ $\times 6 = 12$

46. _____ $\times 2 = 20$

7. _____ $\times 2 = 12$

27. _____ $\times 2 = 4$

47. _____ $\times 2 = 8$

8. _____ $\times 4 = 8$

28. _____ $\times 1 = 2$

48. _____ $\times 2 = 4$

9. _____ $\times 9 = 18$

29. _____ $\times 2 = 20$

49. _____ $\times 1 = 2$

10. _____ $\times 3 = 6$

30. _____ $\times 2 = 22$

50. _____ $\times 2 = 16$

11. _____ $\times 2 = 4$

31. _____ $\times 9 = 18$

51. _____ $\times 6 = 12$

12. _____ $\times 1 = 2$

32. _____ $\times 4 = 8$

52. _____ $\times 4 = 8$

13. _____ $\times 2 = 2$

33. _____ $\times 2 = 6$

53. _____ $\times 2 = 10$

14. _____ $\times 2 = 20$

34. _____ $\times 2 = 20$

54. _____ $\times 2 = 14$

15. _____ $\times 2 = 22$

35. _____ $\times 2 = 6$

55. _____ $\times 9 = 18$

16. _____ $\times 2 = 14$

36. _____ $\times 5 = 10$

56. _____ $\times 2 = 22$

17. _____ $\times 5 = 10$

37. _____ $\times 2 = 18$

57. _____ $\times 12 = 24$

18. _____ $\times 8 = 16$

38. _____ $\times 4 = 8$

58. _____ $\times 2 = 24$

19. _____ $\times 2 = 8$

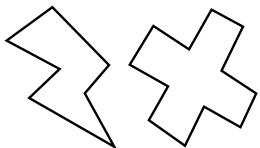
39. _____ $\times 2 = 2$

59. _____ $\times 2 = 6$

20. _____ $\times 2 = 14$

40. _____ $\times 6 = 12$

60. _____ $\times 2 = 18$



SCORE:

Grown-ups:
Can learners spot links between neighbouring questions?



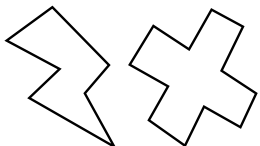
Name: _____

Date: _____

DIVISION 3

Practise 2s

- | | | | | | |
|-----|----------------------|-----|----------------------|-----|----------------------|
| 1. | $14 \div 7 =$ _____ | 21. | $24 \div 2 =$ _____ | 41. | $16 \div 2 =$ _____ |
| 2. | $14 \div 2 =$ _____ | 22. | $12 \div 2 =$ _____ | 42. | $18 \div 2 =$ _____ |
| 3. | $6 \div 3 =$ _____ | 23. | $18 \div 2 =$ _____ | 43. | $14 \div 7 =$ _____ |
| 4. | $4 \div 2 =$ _____ | 24. | $14 \div 7 =$ _____ | 44. | $22 \div 11 =$ _____ |
| 5. | $16 \div 2 =$ _____ | 25. | $6 \div 2 =$ _____ | 45. | $22 \div 2 =$ _____ |
| 6. | $8 \div 4 =$ _____ | 26. | $20 \div 2 =$ _____ | 46. | $2 \div 1 =$ _____ |
| 7. | $20 \div 2 =$ _____ | 27. | $10 \div 5 =$ _____ | 47. | $20 \div 2 =$ _____ |
| 8. | $22 \div 11 =$ _____ | 28. | $14 \div 2 =$ _____ | 48. | $18 \div 9 =$ _____ |
| 9. | $22 \div 2 =$ _____ | 29. | $8 \div 4 =$ _____ | 49. | $16 \div 8 =$ _____ |
| 10. | $14 \div 2 =$ _____ | 30. | $12 \div 2 =$ _____ | 50. | $8 \div 2 =$ _____ |
| 11. | $10 \div 5 =$ _____ | 31. | $8 \div 2 =$ _____ | 51. | $8 \div 4 =$ _____ |
| 12. | $24 \div 12 =$ _____ | 32. | $6 \div 3 =$ _____ | 52. | $12 \div 2 =$ _____ |
| 13. | $24 \div 2 =$ _____ | 33. | $18 \div 9 =$ _____ | 53. | $6 \div 2 =$ _____ |
| 14. | $16 \div 2 =$ _____ | 34. | $20 \div 2 =$ _____ | 54. | $14 \div 2 =$ _____ |
| 15. | $22 \div 2 =$ _____ | 35. | $22 \div 2 =$ _____ | 55. | $6 \div 3 =$ _____ |
| 16. | $10 \div 2 =$ _____ | 36. | $20 \div 2 =$ _____ | 56. | $24 \div 2 =$ _____ |
| 17. | $12 \div 6 =$ _____ | 37. | $24 \div 12 =$ _____ | 57. | $12 \div 2 =$ _____ |
| 18. | $6 \div 2 =$ _____ | 38. | $2 \div 1 =$ _____ | 58. | $10 \div 2 =$ _____ |
| 19. | $6 \div 3 =$ _____ | 39. | $2 \div 2 =$ _____ | 59. | $4 \div 2 =$ _____ |
| 20. | $18 \div 9 =$ _____ | 40. | $16 \div 8 =$ _____ | 60. | $24 \div 2 =$ _____ |



SCORE:

Grown-ups:
Can learners spot links
between neighbouring
questions?



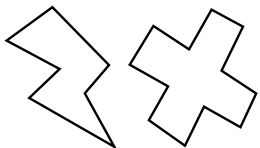
Name: _____

Date: _____

MULTIPLICATION 4

Practise 2s

- | | | | | | |
|-----|-----------------------|-----|-----------------------|-----|-----------------------|
| 1. | $12 \times 2 =$ _____ | 21. | $1 \times 2 =$ _____ | 41. | $2 \times 3 =$ _____ |
| 2. | $11 \times 2 =$ _____ | 22. | $2 \times 4 =$ _____ | 42. | $2 \times 2 =$ _____ |
| 3. | $2 \times 8 =$ _____ | 23. | $4 \times 2 =$ _____ | 43. | $8 \times 2 =$ _____ |
| 4. | $9 \times 2 =$ _____ | 24. | $2 \times 3 =$ _____ | 44. | $2 \times 4 =$ _____ |
| 5. | $2 \times 7 =$ _____ | 25. | $2 \times 6 =$ _____ | 45. | $2 \times 2 =$ _____ |
| 6. | $2 \times 5 =$ _____ | 26. | $9 \times 2 =$ _____ | 46. | $1 \times 2 =$ _____ |
| 7. | $6 \times 2 =$ _____ | 27. | $2 \times 8 =$ _____ | 47. | $11 \times 2 =$ _____ |
| 8. | $2 \times 4 =$ _____ | 28. | $2 \times 10 =$ _____ | 48. | $12 \times 2 =$ _____ |
| 9. | $3 \times 2 =$ _____ | 29. | $11 \times 2 =$ _____ | 49. | $2 \times 7 =$ _____ |
| 10. | $2 \times 3 =$ _____ | 30. | $2 \times 6 =$ _____ | 50. | $10 \times 2 =$ _____ |
| 11. | $6 \times 2 =$ _____ | 31. | $6 \times 2 =$ _____ | 51. | $4 \times 2 =$ _____ |
| 12. | $7 \times 2 =$ _____ | 32. | $9 \times 2 =$ _____ | 52. | $2 \times 9 =$ _____ |
| 13. | $10 \times 2 =$ _____ | 33. | $3 \times 2 =$ _____ | 53. | $6 \times 2 =$ _____ |
| 14. | $2 \times 12 =$ _____ | 34. | $5 \times 2 =$ _____ | 54. | $2 \times 8 =$ _____ |
| 15. | $11 \times 2 =$ _____ | 35. | $2 \times 8 =$ _____ | 55. | $4 \times 2 =$ _____ |
| 16. | $6 \times 2 =$ _____ | 36. | $2 \times 11 =$ _____ | 56. | $11 \times 2 =$ _____ |
| 17. | $2 \times 8 =$ _____ | 37. | $2 \times 10 =$ _____ | 57. | $2 \times 3 =$ _____ |
| 18. | $2 \times 3 =$ _____ | 38. | $1 \times 2 =$ _____ | 58. | $2 \times 10 =$ _____ |
| 19. | $2 \times 2 =$ _____ | 39. | $2 \times 2 =$ _____ | 59. | $2 \times 6 =$ _____ |
| 20. | $2 \times 1 =$ _____ | 40. | $2 \times 5 =$ _____ | 60. | $9 \times 2 =$ _____ |



SCORE:

Grown-ups:
Can learners spot links between neighbouring questions?



Name: _____

MISSING NUMBERS 4

Date: _____

Practise 2s

1. _____ $\times 2 = 12$

21. _____ $\times 2 = 10$

41. _____ $\times 2 = 12$

2. _____ $\times 9 = 18$

22. _____ $\times 2 = 8$

42. _____ $\times 5 = 10$

3. _____ $\times 8 = 16$

23. _____ $\times 3 = 6$

43. _____ $\times 2 = 20$

4. _____ $\times 4 = 8$

24. _____ $\times 6 = 12$

44. _____ $\times 2 = 2$

5. _____ $\times 2 = 6$

25. _____ $\times 2 = 14$

45. _____ $\times 9 = 18$

6. _____ $\times 2 = 10$

26. _____ $\times 2 = 10$

46. _____ $\times 2 = 22$

7. _____ $\times 6 = 12$

27. _____ $\times 2 = 18$

47. _____ $\times 7 = 14$

8. _____ $\times 2 = 2$

28. _____ $\times 8 = 16$

48. _____ $\times 3 = 6$

9. _____ $\times 2 = 4$

29. _____ $\times 2 = 2$

49. _____ $\times 2 = 4$

10. _____ $\times 2 = 20$

30. _____ $\times 12 = 24$

50. _____ $\times 2 = 8$

11. _____ $\times 12 = 24$

31. _____ $\times 2 = 6$

51. _____ $\times 5 = 10$

12. _____ $\times 2 = 12$

32. _____ $\times 2 = 4$

52. _____ $\times 2 = 12$

13. _____ $\times 2 = 14$

33. _____ $\times 6 = 12$

53. _____ $\times 2 = 20$

14. _____ $\times 1 = 2$

34. _____ $\times 2 = 4$

54. _____ $\times 12 = 24$

15. _____ $\times 2 = 4$

35. _____ $\times 2 = 2$

55. _____ $\times 1 = 2$

16. _____ $\times 2 = 22$

36. _____ $\times 12 = 24$

56. _____ $\times 2 = 20$

17. _____ $\times 9 = 18$

37. _____ $\times 9 = 18$

57. _____ $\times 9 = 18$

18. _____ $\times 2 = 20$

38. _____ $\times 2 = 8$

58. _____ $\times 2 = 8$

19. _____ $\times 6 = 12$

39. _____ $\times 2 = 6$

59. _____ $\times 2 = 14$

20. _____ $\times 2 = 14$

40. _____ $\times 8 = 16$

60. _____ $\times 7 = 14$



SCORE:

Grown-ups:
Can learners spot links between neighbouring questions?



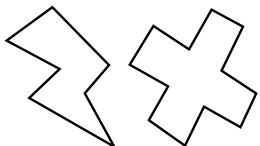
Name: _____

Date: _____

DIVISION 4

Practise 2s

- | | | | | | |
|-----|----------------------|-----|----------------------|-----|----------------------|
| 1. | $24 \div 2 =$ _____ | 21. | $20 \div 2 =$ _____ | 41. | $24 \div 2 =$ _____ |
| 2. | $22 \div 2 =$ _____ | 22. | $24 \div 2 =$ _____ | 42. | $2 \div 1 =$ _____ |
| 3. | $2 \div 1 =$ _____ | 23. | $22 \div 11 =$ _____ | 43. | $2 \div 2 =$ _____ |
| 4. | $2 \div 2 =$ _____ | 24. | $14 \div 2 =$ _____ | 44. | $8 \div 2 =$ _____ |
| 5. | $18 \div 9 =$ _____ | 25. | $14 \div 7 =$ _____ | 45. | $14 \div 7 =$ _____ |
| 6. | $16 \div 2 =$ _____ | 26. | $8 \div 2 =$ _____ | 46. | $14 \div 2 =$ _____ |
| 7. | $10 \div 2 =$ _____ | 27. | $10 \div 2 =$ _____ | 47. | $18 \div 9 =$ _____ |
| 8. | $12 \div 6 =$ _____ | 28. | $18 \div 2 =$ _____ | 48. | $20 \div 2 =$ _____ |
| 9. | $14 \div 7 =$ _____ | 29. | $18 \div 9 =$ _____ | 49. | $22 \div 2 =$ _____ |
| 10. | $20 \div 2 =$ _____ | 30. | $16 \div 2 =$ _____ | 50. | $4 \div 2 =$ _____ |
| 11. | $6 \div 3 =$ _____ | 31. | $12 \div 2 =$ _____ | 51. | $22 \div 11 =$ _____ |
| 12. | $4 \div 2 =$ _____ | 32. | $8 \div 4 =$ _____ | 52. | $6 \div 2 =$ _____ |
| 13. | $10 \div 2 =$ _____ | 33. | $2 \div 2 =$ _____ | 53. | $24 \div 12 =$ _____ |
| 14. | $12 \div 2 =$ _____ | 34. | $10 \div 5 =$ _____ | 54. | $8 \div 2 =$ _____ |
| 15. | $18 \div 2 =$ _____ | 35. | $14 \div 7 =$ _____ | 55. | $14 \div 2 =$ _____ |
| 16. | $8 \div 2 =$ _____ | 36. | $4 \div 2 =$ _____ | 56. | $12 \div 6 =$ _____ |
| 17. | $8 \div 4 =$ _____ | 37. | $18 \div 9 =$ _____ | 57. | $2 \div 2 =$ _____ |
| 18. | $16 \div 8 =$ _____ | 38. | $6 \div 2 =$ _____ | 58. | $4 \div 2 =$ _____ |
| 19. | $2 \div 2 =$ _____ | 39. | $22 \div 11 =$ _____ | 59. | $20 \div 2 =$ _____ |
| 20. | $24 \div 12 =$ _____ | 40. | $12 \div 6 =$ _____ | 60. | $2 \div 1 =$ _____ |



SCORE:

Grown-ups:
Can learners spot links between neighbouring questions?





CHECK 2



Name: _____

Date: _____

- | | | | | | |
|-----|-----------------------|-----|-----------------------|-----|---------------------|
| 1. | $9 \times 2 =$ _____ | 21. | $3 \times 2 =$ _____ | 41. | $2 \div 2 =$ _____ |
| 2. | $4 \times 2 =$ _____ | 22. | $10 \times 2 =$ _____ | 42. | $18 \div 2 =$ _____ |
| 3. | $12 \times 2 =$ _____ | 23. | $2 \times 2 =$ _____ | 43. | $14 \div 2 =$ _____ |
| 4. | $3 \times 2 =$ _____ | 24. | $4 \times 2 =$ _____ | 44. | $22 \div 2 =$ _____ |
| 5. | $6 \times 2 =$ _____ | 25. | $8 \times 2 =$ _____ | 45. | $4 \div 2 =$ _____ |
| 6. | $10 \times 2 =$ _____ | 26. | $6 \times 2 =$ _____ | 46. | $20 \div 2 =$ _____ |
| 7. | $12 \times 2 =$ _____ | 27. | $12 \times 2 =$ _____ | 47. | $24 \div 2 =$ _____ |
| 8. | $2 \times 2 =$ _____ | 28. | $5 \times 2 =$ _____ | 48. | $2 \div 2 =$ _____ |
| 9. | $1 \times 2 =$ _____ | 29. | $1 \times 2 =$ _____ | 49. | $6 \div 2 =$ _____ |
| 10. | $8 \times 2 =$ _____ | 30. | $7 \times 2 =$ _____ | 50. | $16 \div 2 =$ _____ |
| 11. | $4 \times 2 =$ _____ | 31. | $18 \div 2 =$ _____ | 51. | $8 \div 2 =$ _____ |
| 12. | $5 \times 2 =$ _____ | 32. | $10 \div 2 =$ _____ | 52. | $14 \div 2 =$ _____ |
| 13. | $7 \times 2 =$ _____ | 33. | $8 \div 2 =$ _____ | 53. | $6 \div 2 =$ _____ |
| 14. | $6 \times 2 =$ _____ | 34. | $20 \div 2 =$ _____ | 54. | $22 \div 2 =$ _____ |
| 15. | $10 \times 2 =$ _____ | 35. | $22 \div 2 =$ _____ | 55. | $20 \div 2 =$ _____ |
| 16. | $12 \times 2 =$ _____ | 36. | $6 \div 2 =$ _____ | 56. | $10 \div 2 =$ _____ |
| 17. | $1 \times 2 =$ _____ | 37. | $12 \div 2 =$ _____ | 57. | $4 \div 2 =$ _____ |
| 18. | $11 \times 2 =$ _____ | 38. | $14 \div 2 =$ _____ | 58. | $14 \div 2 =$ _____ |
| 19. | $9 \times 2 =$ _____ | 39. | $10 \div 2 =$ _____ | 59. | $12 \div 2 =$ _____ |
| 20. | $7 \times 2 =$ _____ | 40. | $16 \div 2 =$ _____ | 60. | $2 \div 2 =$ _____ |

SCORE:
(5 minute limit)

/60

TIME TAKEN (optional)

<input type="text"/>	<input type="text"/>
MINUTES	SECONDS

